

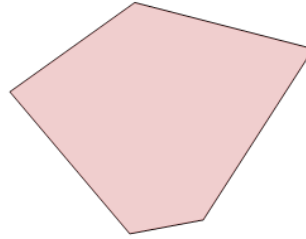


Math worksheet on 'Classifying Polygons as Regular or Irregular (Level 2)'. Part of a broader unit on 'Geometry - Shape Classification (2D) - Advanced'

Learn online:

app.mobius.academy/math/units/geometry_shapes_2d_classifying_advanced/

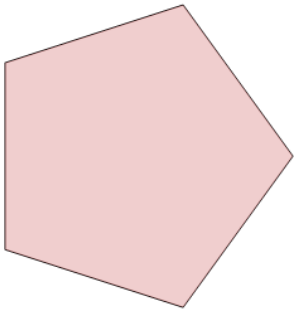
1



Name the type of shape

a	b
Irregular	Regular

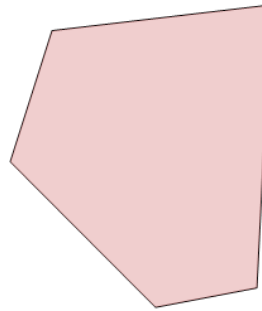
2



Name the type of shape

a	b
Irregular	Regular

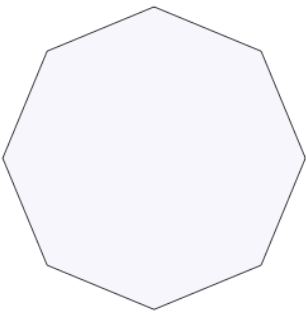
3



Name the type of shape

a	b
Irregular	Regular


4



Name the type of shape

a	b
Regular	Irregular

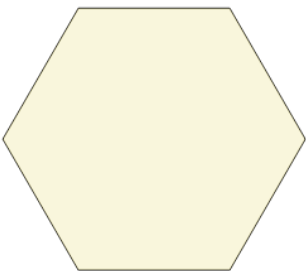
5



Name the type of shape

a	b
Irregular	Regular


6



Name the type of shape

a	b
Irregular	Regular

7



Name the type of shape

a	b
Regular	Irregular