




Math worksheet on 'Quadrilaterals (Level 1)'. Part of a broader unit on 'Geometry - Shape Classification (2D) - Advanced'

Learn online:

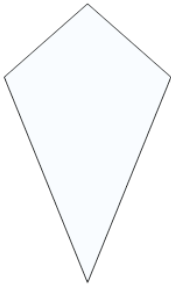
app.mobius.academy/math/units/geometry_shapes_2d_classifying_advanced/

1 Name the type of shape



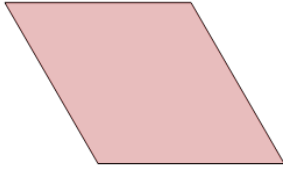
a	Trapezoid
b	Square
c	Parallelogram
d	Rectangle
e	Kite
f	Rhombus

2 Name the type of shape




a	Parallelogram
b	Kite
c	Rhombus
d	Trapezoid
e	Rectangle
f	Square

3 Name the type of shape




a	Trapezoid	b	Rhombus
c	Rectangle	d	Square
e	Kite		

4 Name the type of shape



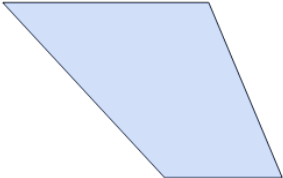
a	Square	b	Trapezoid
c	Kite		

5 Name the type of shape



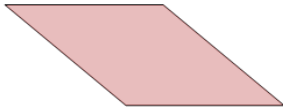
a	Kite	b	Trapezoid
c	Square		

6 Name the type of shape



a	Parallelogram
b	Square
c	Trapezoid
d	Rectangle
e	Rhombus
f	Kite

7 Name the type of shape



a	Rhombus	b	Trapezoid
c	Kite	d	Square
e	Rectangle		