

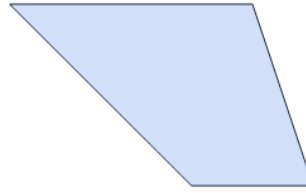


Math worksheet on 'Quadrilaterals - Is Shape of a Type (Level 1)'. Part of a broader unit on 'Geometry - Shape Classification (2D) - Advanced'

Learn online:

app.mobius.academy/math/units/geometry_shapes_2d_classifying_advanced/

1



Is this shape a Trapezoid (a pair of parallel sides of different lengths connected by sides of the same length)?

a

No

b

Yes

2



Is this shape a Rectangle (four sides, all at right angles)?

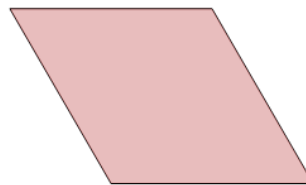
a

Yes

b

No

3



Is this shape a Trapezoid (a pair of parallel sides of different lengths connected by sides of the same length)?

a

Yes

b

No

4



Is this shape a Rhombus (four sides of the same length)?

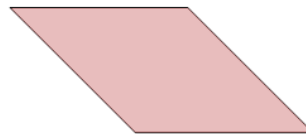
a

No

b

Yes

5



Is this shape a Rhombus (four sides of the same length)?

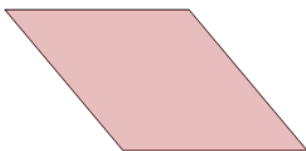
a

Yes

b

No

6



Is this shape a Pentagon (five sides)?

a

No

b

Yes

7



Is this shape a Square (four sides of the same length, all at right angles)?

a

Yes

b

No