



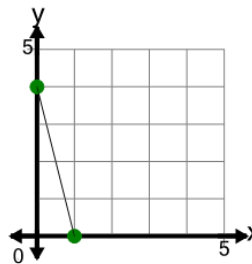
Math worksheet on 'Slope - Find Equivalent - Decimal Slope to Graph (Level 1)'. Part of a broader unit on 'Line Equations and Graphing - Intro'

Learn online: app.mobius.academy/math/units/line_equations_and_graphing_intro/

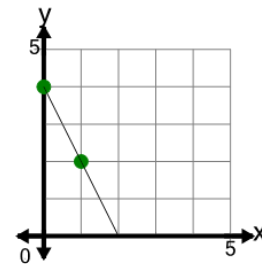
1 What line has this slope?

$$m=-4$$

a



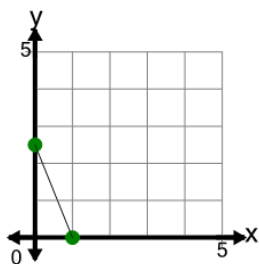
b



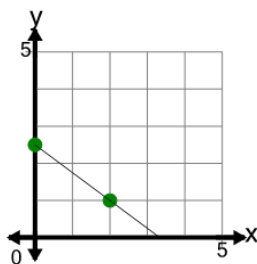
2 What line has this slope?

$$m=-0.5$$

a



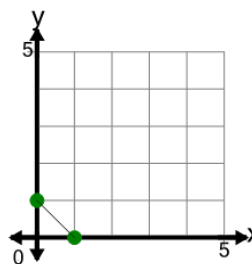
b



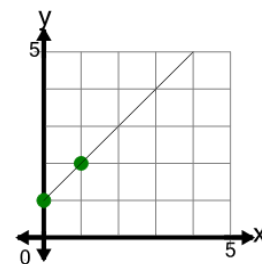
3 What line has this slope?

$$m=1$$

a



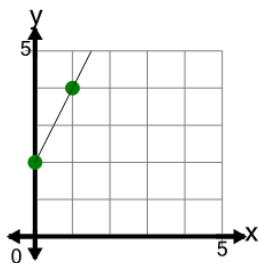
b



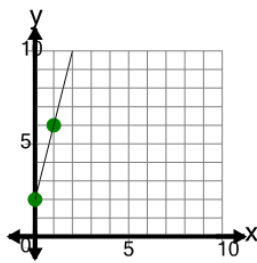
4 What line has this slope?

$$m=4$$

a



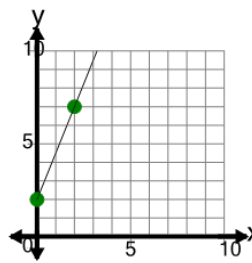
b



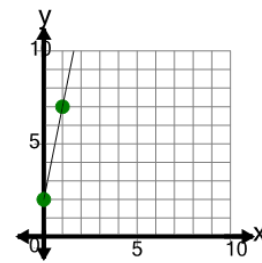
5 What line has this slope?

$$m=5$$

a



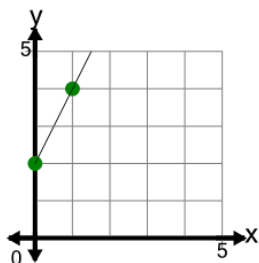
b



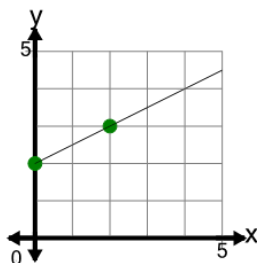
6 What line has this slope?

$$m=2$$

a



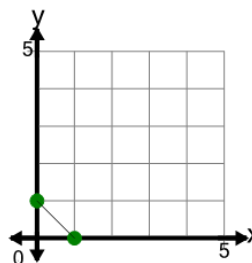
b



7 What line has this slope?

$$m=-1$$

a



b

