

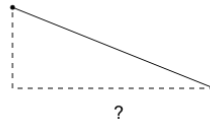


Math worksheet on 'Slope - Rise and Run Identify - First Time (Level 2)'. Part of a broader unit on 'Slope - Intro'

Learn online: app.mobius.academy/math/units/slope_intro/

1

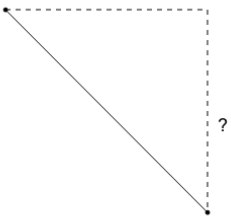
When calculating slope, what is the name of the distance that a line goes horizontally?



a	Rinse	b	Rope
c	Run	d	Roar

2

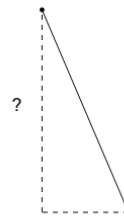
When calculating slope, what is the name of the distance that a line goes up?



a	Race	b	Rise
c	Rinse	d	Roar

3

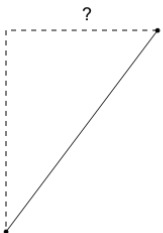
When calculating slope, what is the name of the distance that a line goes up?



a	Razor	b	Roar
c	Rise	d	Risk

4

When calculating slope, what is the name of the distance that a line goes horizontally?



a	Rope	b	Roar
c	Rinse	d	Run

5

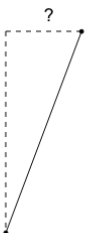
When calculating slope, what is the name of the distance that a line goes horizontally?



a	Risk	b	Run
c	Race	d	Roar

6

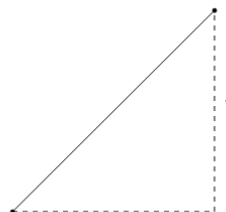
When calculating slope, what is the name of the distance that a line goes horizontally?



a	Run	b	Road
c	Roar	d	Race

7

When calculating slope, what is the name of the distance that a line goes up?



a	Road	b	Rise
c	Race	d	Risk