

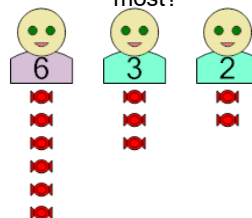


Math worksheet on 'Statistics - Concept Intro Median Description to Answer (Level 1)'. Part of a broader unit on 'Probability and Statistics - Mean, Median, and Mode - Intro'

Learn online:

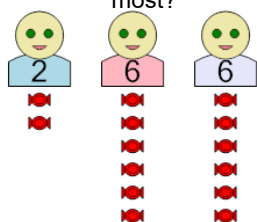
app.mobius.academy/math/units/probability_and_statistics_mean_median_mode_intro

1 How many candies would the MIDDLE kid have if you arranged them from fewest to most?



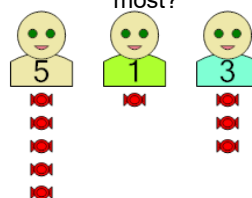
a	b	c
3	1	8
d	e	f
0	6	2

2 How many candies would the MIDDLE kid have if you arranged them from fewest to most?



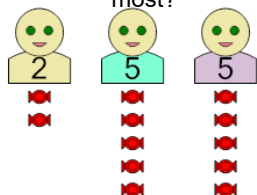
a	b	c
10	3	6
d	e	f
7	0	9

3 How many candies would the MIDDLE kid have if you arranged them from fewest to most?



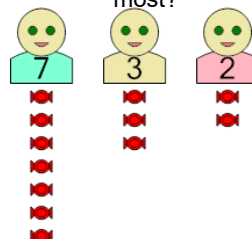
a	b	c
0	3	1
d	e	f
2	7	6

4 How many candies would the MIDDLE kid have if you arranged them from fewest to most?



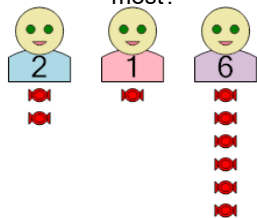
a	b	c
9	0	6
d	e	f
5	8	4

5 How many candies would the MIDDLE kid have if you arranged them from fewest to most?



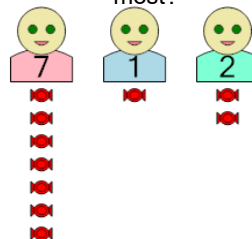
a	b	c
1	3	6
d	e	f
7	2	5

6 How many candies would the MIDDLE kid have if you arranged them from fewest to most?



a	b	c
2	5	3
d	e	f
1	4	0

7 How many candies would the MIDDLE kid have if you arranged them from fewest to most?



a	b	c
0	7	6
d	e	f
4	2	1