

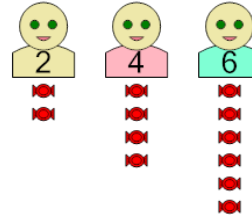


Math worksheet on 'Statistics - Concept Intro Median Term to Answer (Level 1)'. Part of a broader unit on 'Probability and Statistics - Mean, Median, and Mode Intro'

Learn online:

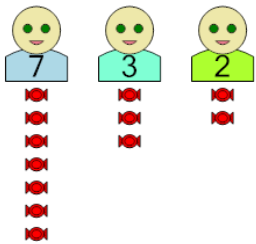
[app.mobius.academy/math/units/probability\\_and\\_statistics\\_mean\\_median\\_mode\\_intro](http://app.mobius.academy/math/units/probability_and_statistics_mean_median_mode_intro)

1 What is the MEDIAN number of candies among the kids?



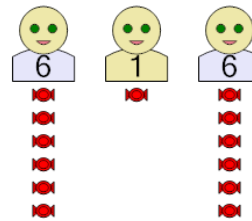
|   |   |   |
|---|---|---|
| a | b | c |
| 4 | 3 | 5 |
| d | e | f |
| 7 | 0 | 6 |

2 What is the MEDIAN number of candies among the kids?



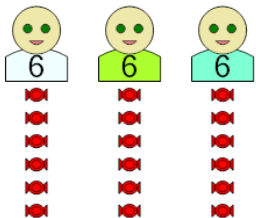
|   |   |   |
|---|---|---|
| a | b | c |
| 2 | 1 | 6 |
| d | e | f |
| 3 | 8 | 5 |

3 What is the MEDIAN number of candies among the kids?



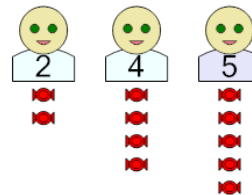
|    |   |   |
|----|---|---|
| a  | b | c |
| 11 | 6 | 1 |
| d  | e | f |
| 10 | 7 | 2 |

4 What is the MEDIAN number of candies among the kids?



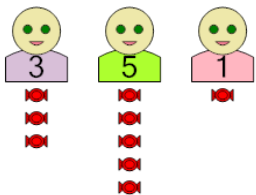
|   |   |    |
|---|---|----|
| a | b | c  |
| 6 | 1 | 10 |
| d | e | f  |
| 8 | 9 | 11 |

5 What is the MEDIAN number of candies among the kids?



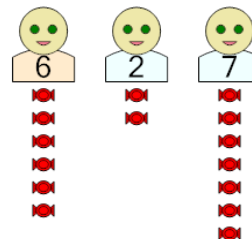
|   |   |   |
|---|---|---|
| a | b | c |
| 1 | 7 | 5 |
| d | e | f |
| 4 | 0 | 2 |

6 What is the MEDIAN number of candies among the kids?



|   |   |   |
|---|---|---|
| a | b | c |
| 6 | 2 | 1 |
| d | e | f |
| 3 | 0 | 8 |

7 What is the MEDIAN number of candies among the kids?



|   |   |    |
|---|---|----|
| a | b | c  |
| 2 | 1 | 0  |
| d | e | f  |
| 6 | 9 | 11 |