

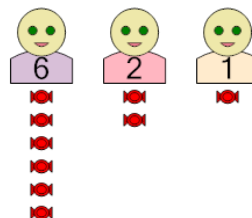


Math worksheet on 'Statistics - Concept Intro Range Term to Answer (Level 1)'. Part of a broader unit on 'Probability and Statistics - Mean, Median, and Mode Intro'

Learn online:

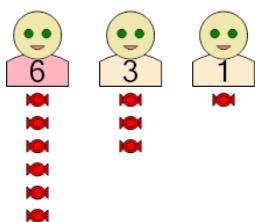
app.mobius.academy/math/units/probability_and_statistics_mean_median_mode_intro

1 What is the RANGE of the number of candies among the kids?



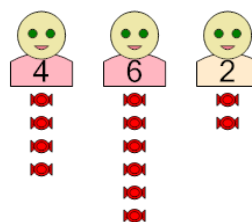
a	b	c
3	6	4
d	e	f
5	7	0

2 What is the RANGE of the number of candies among the kids?



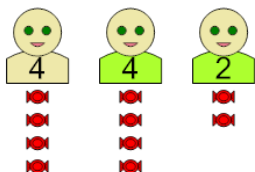
a	b	c
8	5	10
d	e	f
4	7	0

3 What is the RANGE of the number of candies among the kids?



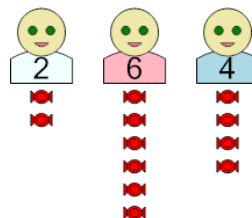
a	b	c
7	2	0
d	e	f
4	9	8

4 What is the RANGE of the number of candies among the kids?



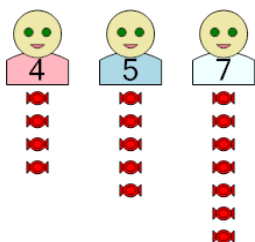
a	b	c
7	6	3
d	e	f
2	1	4

5 What is the RANGE of the number of candies among the kids?



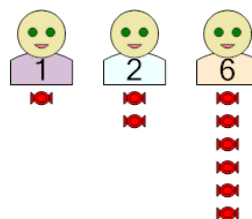
a	b	c
4	3	7
d	e	f
0	2	6

6 What is the RANGE of the number of candies among the kids?



a	b	c
7	2	3
d	e	f
5	1	6

7 What is the RANGE of the number of candies among the kids?



a	b	c
2	6	1
d	e	f
10	8	5