

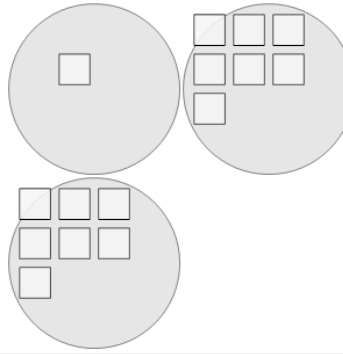


Math worksheet on 'Statistics - Median - Pictures to Correct Term (Level 1)'. Part of a broader unit on 'Probability and Statistics - Mean, Median, and Mode Intro'

Learn online:

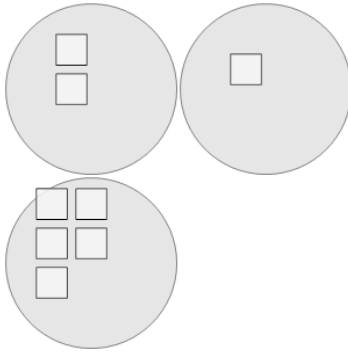
app.mobius.academy/math/units/probability_and_statistics_mean_median_mode_intro

1 What is the MEDIAN number of white squares in a group?



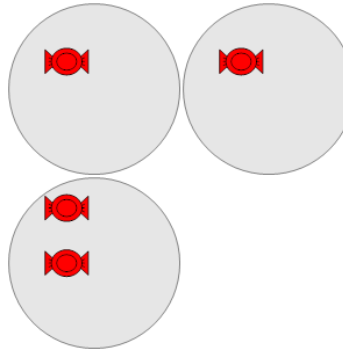
a	b	c
3	1	10
d	e	f
7	6	11

2 What is the MEDIAN number of white squares in a group?



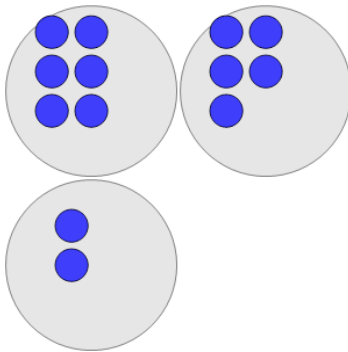
a	b	c
2	6	1
d	e	f
5	4	7

3 What is the MEDIAN number of red candies in a group?



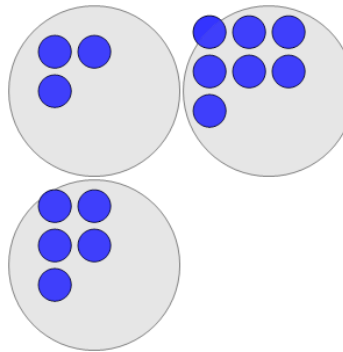
a	b	c
3	0	1
d	e	f
2	5	4

4 What is the MEDIAN number of blue circles in a group?



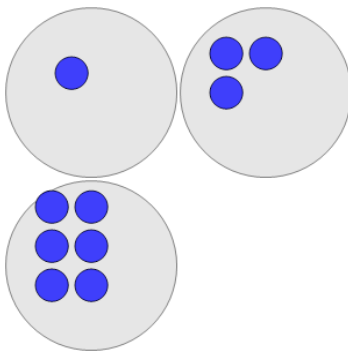
a	b	c
4	9	7
d	e	f
5	0	1

5 What is the MEDIAN number of blue circles in a group?



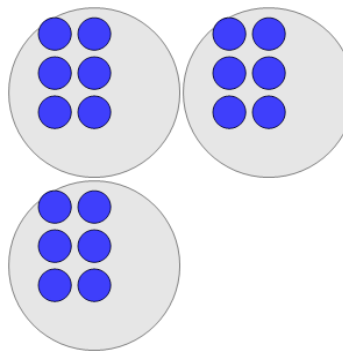
a	b	c
4	3	0
d	e	f
2	5	7

6 What is the MEDIAN number of blue circles in a group?



a	b	c
2	3	5
d	e	f
4	1	6

7 What is the MEDIAN number of blue circles in a group?



a	b	c
3	1	0
d	e	f
6	10	8