

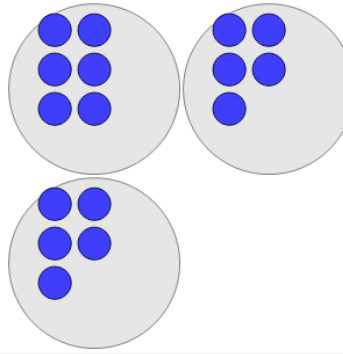


Math worksheet on 'Statistics - Median - Pictures to Correct Term (Level 2)'. Part of a broader unit on 'Probability and Statistics - Mean, Median, and Mode Intro'

Learn online:

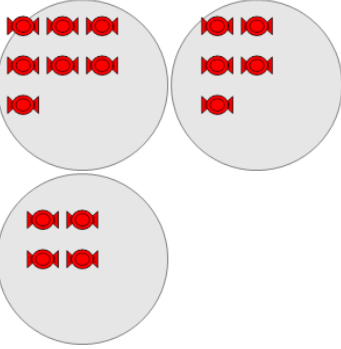
app.mobius.academy/math/units/probability_and_statistics_mean_median_mode_intro

1 What is the MEDIAN number of blue circles in a group?



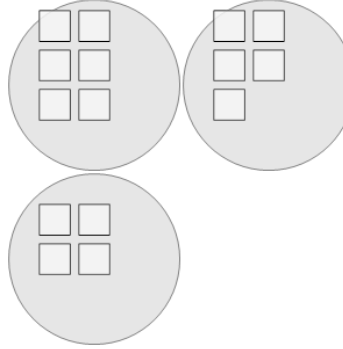
a	b	c
8	1	7
d	e	f
0	6	5

2 What is the MEDIAN number of red candies in a group?



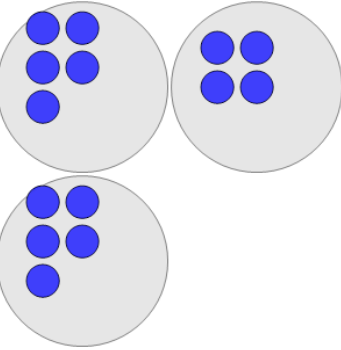
a	b	c
5	1	4
d	e	f
0	3	10

3 What is the MEDIAN number of white squares in a group?



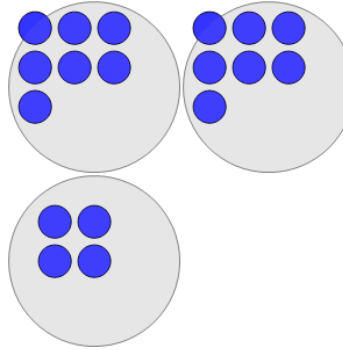
a	b	c
0	3	5
d	e	f
4	9	8

4 What is the MEDIAN number of blue circles in a group?



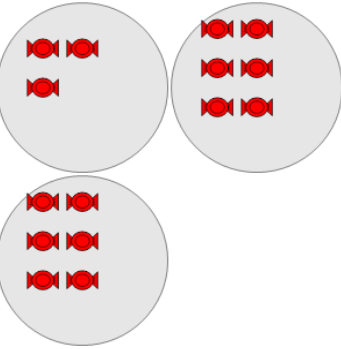
a	b	c
6	5	4
d	e	f
8	10	7

5 What is the MEDIAN number of blue circles in a group?



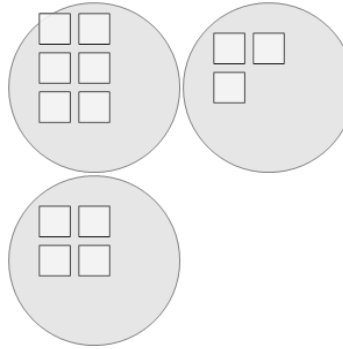
a	b	c
6	10	7
d	e	f
1	8	9

6 What is the MEDIAN number of red candies in a group?



a	b	c
4	7	10
d	e	f
9	6	2

7 What is the MEDIAN number of white squares in a group?



a	b	c
3	2	5
d	e	f
4	7	8