

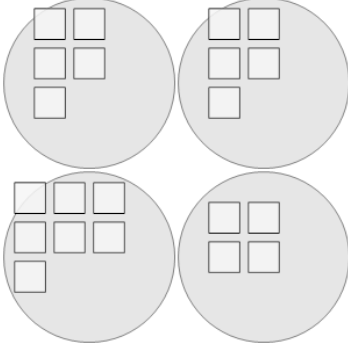


Math worksheet on 'Statistics - Mode - Pictures to Correct Term (Level 1)'. Part of a broader unit on 'Probability and Statistics - Mean, Median, and Mode Intro'

Learn online:

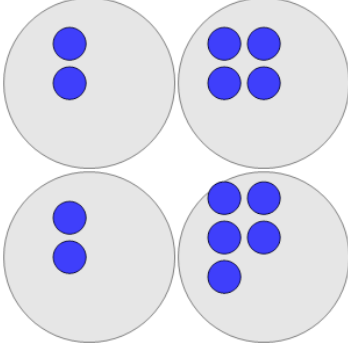
[app.mobius.academy/math/units/probability\\_and\\_statistics\\_mean\\_median\\_mode\\_intro](http://app.mobius.academy/math/units/probability_and_statistics_mean_median_mode_intro)

**1** What is the MODE of the number of white squares in each group?



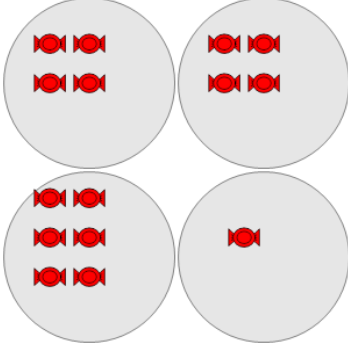
a	b	c
6	4	5
d	e	f
7	0	3

**2** What is the MODE of the number of blue circles in each group?



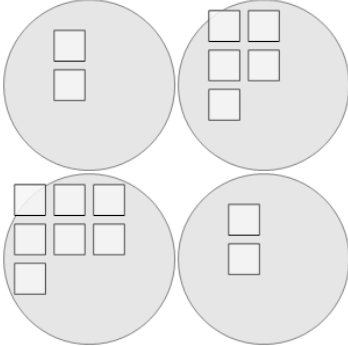
a	b	c
4	0	2
d	e	f
3	1	7

**3** What is the MODE of the number of red candies in each group?



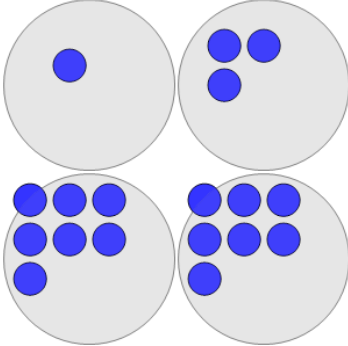
a	b	c
1	3	2
d	e	f
8	4	0

**4** What is the MODE of the number of white squares in each group?



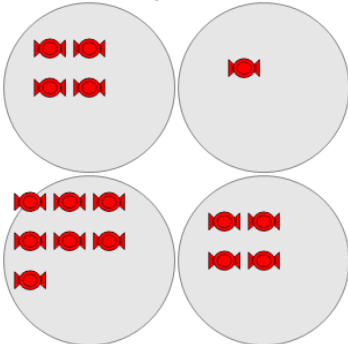
a	b	c
7	1	3
d	e	f
2	5	0

**5** What is the MODE of the number of blue circles in each group?



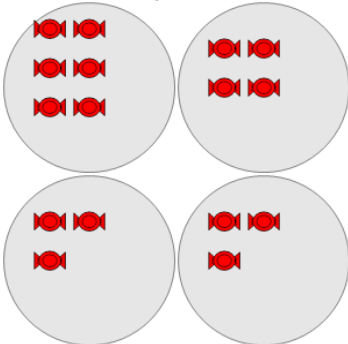
a	b	c
9	2	5
d	e	f
8	7	12

**6** What is the MODE of the number of red candies in each group?



a	b	c
7	2	6
d	e	f
4	3	1

**7** What is the MODE of the number of red candies in each group?



a	b	c
7	1	6
d	e	f
3	0	2