

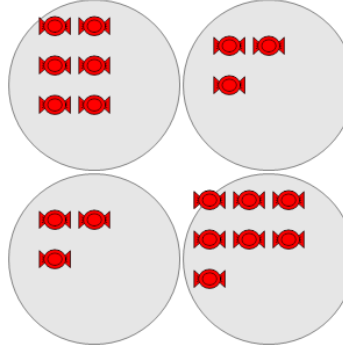


Math worksheet on 'Statistics - Mode - Pictures to Correct Term (Level 2)'. Part of a broader unit on 'Probability and Statistics - Mean, Median, and Mode Intro'

Learn online:

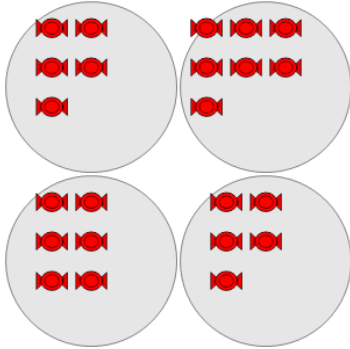
app.mobius.academy/math/units/probability_and_statistics_mean_median_mode_intro

1 What is the MODE of the number of red candies in each group?




a	b	c
8	3	6
d	e	f
7	4	2

2 What is the MODE of the number of red candies in each group?



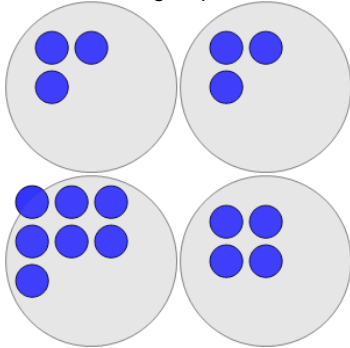
a	b	c
5	4	6
d	e	f
2	1	9

3 What is the MODE of the number of white squares in each group?



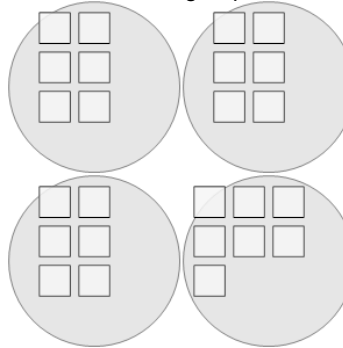
a	b	c
8	5	1
d	e	f
9	4	2

4 What is the MODE of the number of blue circles in each group?



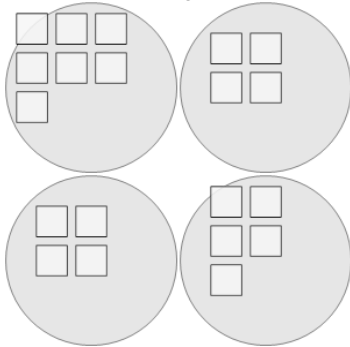
a	b	c
1	7	5
d	e	f
3	0	2

5 What is the MODE of the number of white squares in each group?



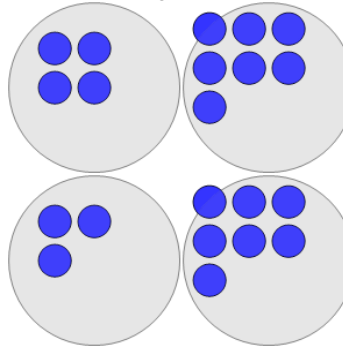
a	b	c
0	2	6
d	e	f
3	11	8

6 What is the MODE of the number of white squares in each group?



a	b	c
5	3	8
d	e	f
7	9	4

7 What is the MODE of the number of blue circles in each group?



a	b	c
9	4	7
d	e	f
2	11	6