

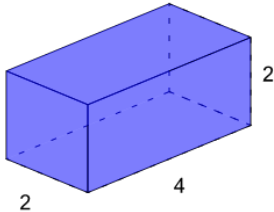


Math worksheet on 'Surface Area of a Rectangular Prism - Calculate (Level 1)'. Part of a broader unit on 'Geometry - Surface Area of 3D Shapes - Intro'

Learn online:

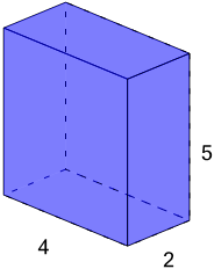
app.mobius.academy/math/units/geometry_surface_area_basic_shapes_intro/

1 What is the surface area of this Rectangular Prism?



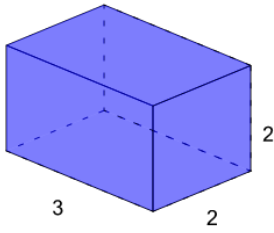
a	b	c
40	16	28
d	e	f
44	76	72

2 What is the surface area of this Rectangular Prism?



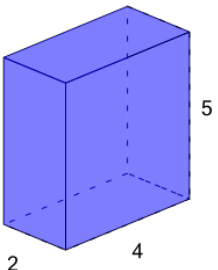
a	b	c
41	76	97
d	e	f
62	83	20

3 What is the surface area of this Rectangular Prism?



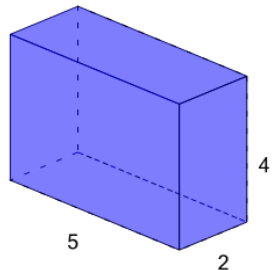
a	b	c
59	26	44
d	e	f
32	23	11

4 What is the surface area of this Rectangular Prism?



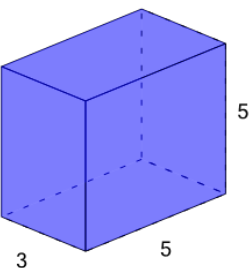
a	b	c
76	27	83
d	e	f
34	55	62

5 What is the surface area of this Rectangular Prism?



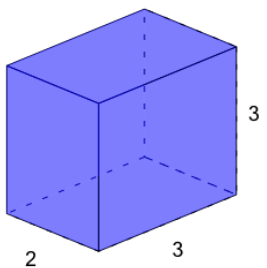
a	b	c
104	6	69
d	e	f
76	20	139

6 What is the surface area of this Rectangular Prism?



a	b	c
132	33	198
d	e	f
209	110	176

7 What is the surface area of this Rectangular Prism?



a	b	c
10	42	38
d	e	f
6	54	66