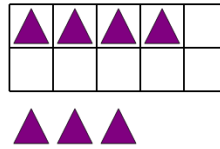




Math worksheet on 'Ten Groups - Add, With Carry, Less than 20 (Level 1)'. Part of a broader unit on 'Ten Groups - Adding'

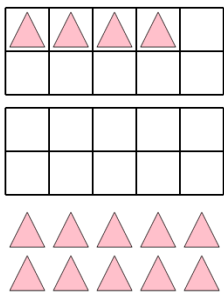
Learn online: app.mobius.academy/math/units/ten_groups_addition_intro/

1 Find the total number of purple triangles when you add the 3 at the bottom




a	b	c
16	7	10
d	e	f
6	3	15

2 Find the total number of pink triangles when you add the 10 at the bottom



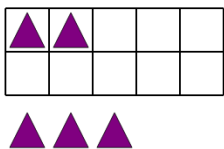
a	b	c
11	14	22
d	e	f
18	15	12

3 Find the total number of purple triangles when you add the 3 at the bottom



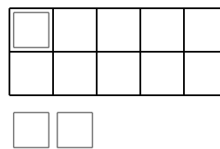
a	b	c
7	11	14
d	e	f
16	4	18

4 Find the total number of purple triangles when you add the 3 at the bottom



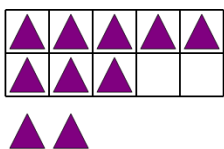
a	b	c
4	12	5
d	e	f
14	3	11

5 Find the total number of white squares when you add the 2 at the bottom



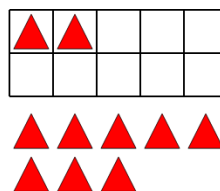
a	b	c
7	10	9
d	e	f
2	3	4

6 Find the total number of purple triangles when you add the 2 at the bottom



a	b	c
19	17	10
d	e	f
14	13	12

7 Find the total number of red triangles when you add the 8 at the bottom



a	b	c
14	15	10
d	e	f
4	16	9