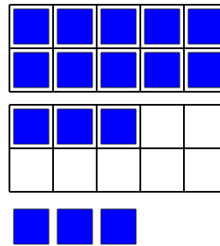




Math worksheet on 'Ten Groups - Add, With Carry, Less than 30 (Level 1)'. Part of a broader unit on 'Ten Groups - Adding'

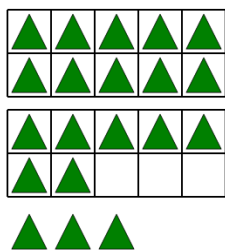
Learn online: app.mobius.academy/math/units/ten_groups_addition_intro/

1 Find the total number of blue squares when you add the 3 at the bottom



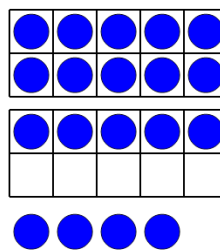
| | | |
|----------|----------|----------|
| a | b | c |
| 9 | 15 | 6 |
| d | e | f |
| 16 | 7 | 12 |

2 Find the total number of green triangles when you add the 3 at the bottom



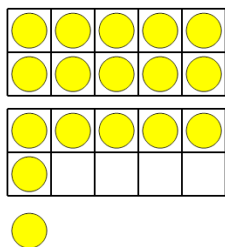
| | | |
|----------|----------|----------|
| a | b | c |
| 24 | 2 | 32 |
| d | e | f |
| 22 | 10 | 20 |

3 Find the total number of blue circles when you add the 4 at the bottom




| | | |
|----------|----------|----------|
| a | b | c |
| 26 | 20 | 11 |
| d | e | f |
| 9 | 19 | 23 |

4 Find the total number of yellow circles when you add the 1 at the bottom



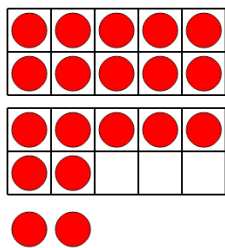
| | | |
|----------|----------|----------|
| a | b | c |
| 10 | 12 | 9 |
| d | e | f |
| 17 | 15 | 25 |

5 Find the total number of white squares when you add the 2 at the bottom



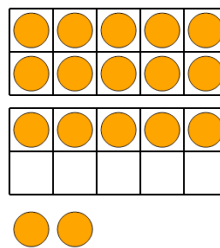
| | | |
|----------|----------|----------|
| a | b | c |
| 14 | 19 | 25 |
| d | e | f |
| 9 | 28 | 12 |

6 Find the total number of red circles when you add the 2 at the bottom



| | | |
|----------|----------|----------|
| a | b | c |
| 25 | 24 | 19 |
| d | e | f |
| 17 | 10 | 28 |

7 Find the total number of orange circles when you add the 2 at the bottom



| | | |
|----------|----------|----------|
| a | b | c |
| 10 | 15 | 17 |
| d | e | f |
| 8 | 25 | 13 |