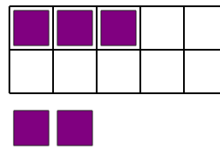




Math worksheet on 'Ten Groups - Add, Without Carry, Less than 10 (Level 1)'. Part of a broader unit on 'Ten Groups - Adding'

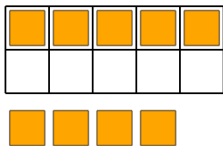
Learn online: app.mobius.academy/math/units/ten_groups_addition_intro/

1 Find the total number of purple squares when you add the 2 at the bottom



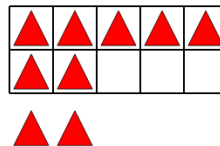
a	b	c
11	13	5
d	e	f
3	6	9

2 Find the total number of orange squares when you add the 4 at the bottom



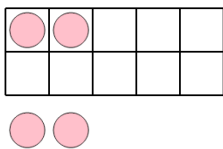
a	b	c
11	1	6
d	e	f
17	9	16

3 Find the total number of red triangles when you add the 2 at the bottom



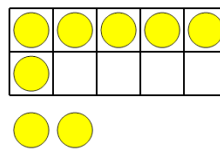
a	b	c
13	9	16
d	e	f
1	7	14

4 Find the total number of pink circles when you add the 2 at the bottom



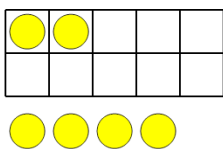
a	b	c
9	10	2
d	e	f
7	12	4

5 Find the total number of yellow circles when you add the 2 at the bottom




a	b	c
6	8	10
d	e	f
9	3	2

6 Find the total number of yellow circles when you add the 4 at the bottom



a	b	c
6	9	3
d	e	f
7	1	4

7 Find the total number of purple squares when you add the 4 at the bottom



a	b	c
6	8	3
d	e	f
2	17	10