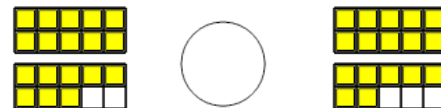




Math worksheet on 'Ten Groups - Compare, Less than 20 - to Symbol (Level 1)'. Part of a broader unit on 'Ten Groups - Less Than, Greater Than'


Learn online: app.mobius.academy/math/units/ten_groups_compare_intro/

1 Is the first ten group less than, greater than, or equal to the second ten group?




a < b = c >

2 Is the first ten group less than, greater than, or equal to the second ten group?



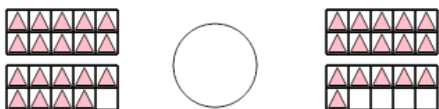
a < b = c >

3 Is the first ten group less than, greater than, or equal to the second ten group?



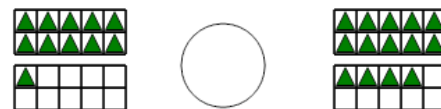
a < b = c >

4 Is the first ten group less than, greater than, or equal to the second ten group?



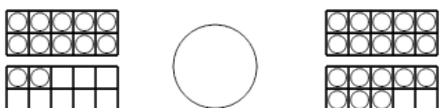
a < b = c >

5 Is the first ten group less than, greater than, or equal to the second ten group?



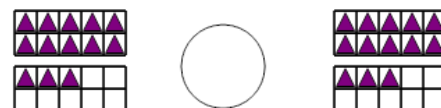
a < b = c >

6 Is the first ten group less than, greater than, or equal to the second ten group?



a < b = c >

7 Is the first ten group less than, greater than, or equal to the second ten group?



a < b = c >