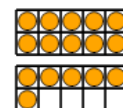
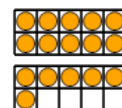




Math worksheet on 'Ten Groups - Compare, Less than 20 - to Words (Level 1)'. Part of a broader unit on 'Ten Groups - Less Than, Greater Than'

Learn online: app.mobius.academy/math/units/ten_groups_compare_intro/

1 Is the first ten group less than, greater than, or equal to the second ten group?




a less

b equals

c greater

2 Is the first ten group less than, greater than, or equal to the second ten group?

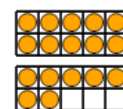
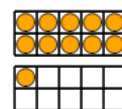


a less

b equals

c greater

3 Is the first ten group less than, greater than, or equal to the second ten group?





a less

b equals

c greater

4 Is the first ten group less than, greater than, or equal to the second ten group?





a less

b equals

c greater

5 Is the first ten group less than, greater than, or equal to the second ten group?



a less

b equals

c greater

6 Is the first ten group less than, greater than, or equal to the second ten group?



a less

b equals

c greater

7 Is the first ten group less than, greater than, or equal to the second ten group?



a less

b equals

c greater