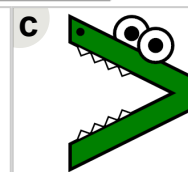
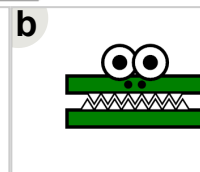





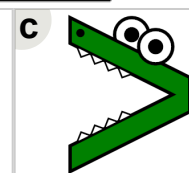
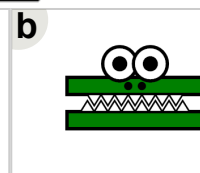


Math worksheet on 'Ten Groups - Compare, Less than 30 - to Alligator (Level 1)'. Part of a broader unit on 'Ten Groups - Less Than, Greater Than'

Learn online: app.mobius.academy/math/units/ten_groups_compare_intro/

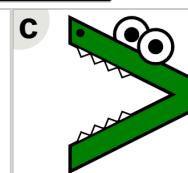
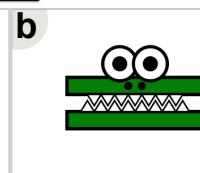

1 Which way would the alligator face to eat the largest number of shapes?



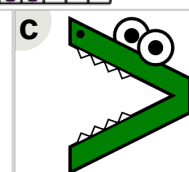
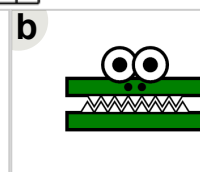


2 Which way would the alligator face to eat the largest number of shapes?




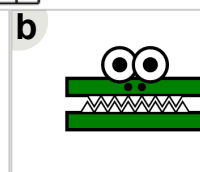

3 Which way would the alligator face to eat the largest number of shapes?



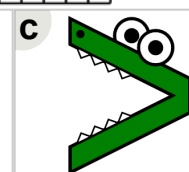
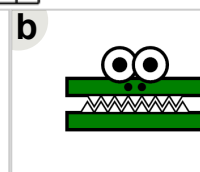


4 Which way would the alligator face to eat the largest number of shapes?



5 Which way would the alligator face to eat the largest number of shapes?



6 Which way would the alligator face to eat the largest number of shapes?



7 Which way would the alligator face to eat the largest number of shapes?

