




Math worksheet on 'Ten Groups - Compare, Less than 30 - to Symbol (Level 1)'. Part of a broader unit on 'Ten Groups - Less Than, Greater Than'


Learn online: [app.mobius.academy/math/units/ten\\_groups\\_compare\\_intro/](http://app.mobius.academy/math/units/ten_groups_compare_intro/)

1 Is the first ten group less than, greater than, or equal to the second ten group?




<b>a</b>	<b>b</b>	<b>c</b>
<	=	>

2 Is the first ten group less than, greater than, or equal to the second ten group?




<b>a</b>	<b>b</b>	<b>c</b>
<	=	>

3 Is the first ten group less than, greater than, or equal to the second ten group?




<b>a</b>	<b>b</b>	<b>c</b>
<	=	>

4 Is the first ten group less than, greater than, or equal to the second ten group?




<b>a</b>	<b>b</b>	<b>c</b>
<	=	>

5 Is the first ten group less than, greater than, or equal to the second ten group?




<b>a</b>	<b>b</b>	<b>c</b>
<	=	>

6 Is the first ten group less than, greater than, or equal to the second ten group?



<b>a</b>	<b>b</b>	<b>c</b>
<	=	>

7 Is the first ten group less than, greater than, or equal to the second ten group?



<b>a</b>	<b>b</b>	<b>c</b>
<	=	>