




Math worksheet on 'Ten Groups - Compare, Less than 30 - to Words (Level 1)'. Part of a broader unit on 'Ten Groups - Less Than, Greater Than'


Learn online: app.mobius.academy/math/units/ten_groups_compare_intro/

1 Is the first ten group less than, greater than, or equal to the second ten group?




- | | | | |
|----------|---------|----------|--------|
| a | less | b | equals |
| c | greater | | |

2 Is the first ten group less than, greater than, or equal to the second ten group?




- | | | | |
|----------|---------|----------|--------|
| a | less | b | equals |
| c | greater | | |

3 Is the first ten group less than, greater than, or equal to the second ten group?




- | | | | |
|----------|---------|----------|--------|
| a | less | b | equals |
| c | greater | | |

4 Is the first ten group less than, greater than, or equal to the second ten group?




- | | | | |
|----------|---------|----------|--------|
| a | less | b | equals |
| c | greater | | |

5 Is the first ten group less than, greater than, or equal to the second ten group?




- | | | | |
|----------|---------|----------|--------|
| a | less | b | equals |
| c | greater | | |

6 Is the first ten group less than, greater than, or equal to the second ten group?



- | | | | |
|----------|---------|----------|--------|
| a | less | b | equals |
| c | greater | | |

7 Is the first ten group less than, greater than, or equal to the second ten group?



- | | | | |
|----------|---------|----------|--------|
| a | less | b | equals |
| c | greater | | |