

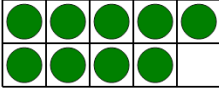


Math worksheet on 'Ten Groups - Count, Less than 10 (Level 1)'. Part of a broader unit on 'Ten Groups - Counting'

Learn online: app.mobius.academy/math/units/ten_groups_counting_intro/

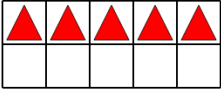
1 Find the total number of green circles

a	b	c
9	13	16
d	e	f
8	3	10



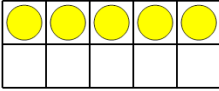
2 Find the total number of red triangles

a	b	c
9	13	8
d	e	f
14	5	3



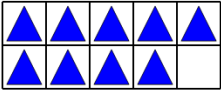
3 Find the total number of yellow circles

a	b	c
13	1	3
d	e	f
6	5	4



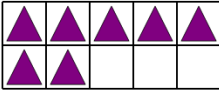
4 Find the total number of blue triangles

a	b	c
9	3	16
d	e	f
11	8	14



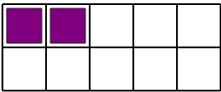
5 Find the total number of purple triangles

a	b	c
7	1	4
d	e	f
6	11	3



6 Find the total number of purple squares

a	b	c
2	6	7
d	e	f
5	3	4



7 Find the total number of yellow squares

a	b	c
1	7	3
d	e	f
10	4	2

