

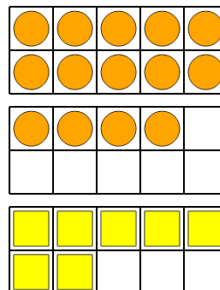


Math worksheet on 'Ten Groups - Subtract, With Borrow, Less than 20 (Level 1)'. Part of a broader unit on 'Addition and Subtraction of Integers - 1 and 2 Digit'

Learn online:

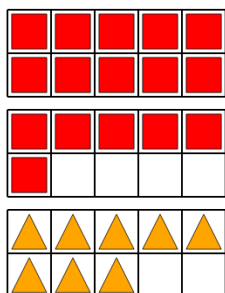
[app.mobius.academy/math/units/addition\\_and\\_subtraction\\_integers\\_1\\_and\\_2\\_digit/](http://app.mobius.academy/math/units/addition_and_subtraction_integers_1_and_2_digit/)

**1** How many more orange circles than yellow squares are there?



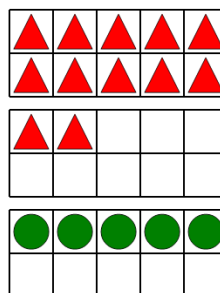
a	b	c
1	5	7
d	e	f
15	13	12

**2** How many more red squares than orange triangles are there?



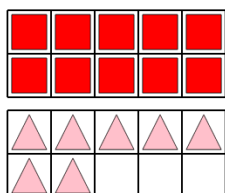
a	b	c
10	3	1
d	e	f
11	9	8

**3** How many more red triangles than green circles are there?



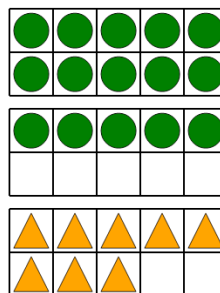
a	b	c
7	11	9
d	e	f
3	2	5

**4** How many more red squares than pink triangles are there?



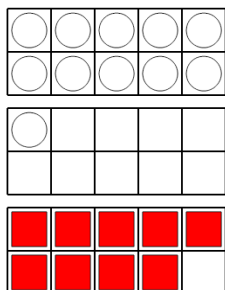
a	b	c
9	4	1
d	e	f
7	3	5

**5** How many more green circles than orange triangles are there?



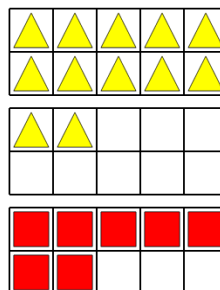
a	b	c
5	2	3
d	e	f
6	16	7

**6** How many more white circles than red squares are there?



a	b	c
2	7	1
d	e	f
5	4	10

**7** How many more yellow triangles than red squares are there?



a	b	c
1	4	2
d	e	f
14	11	5