

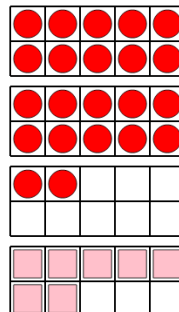


Math worksheet on 'Ten Groups - Subtract, With Borrow, Less than 30 (Level 1)'. Part of a broader unit on 'Addition and Subtraction of Integers - 1 and 2 Digit'

Learn online:

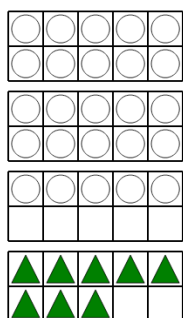
app.mobius.academy/math/units/addition_and_subtraction_integers_1_and_2_digit/

1 How many more red circles than pink squares are there?



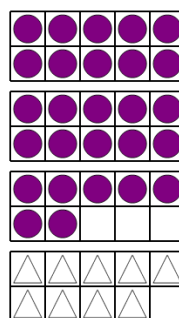
a	b	c
21	19	9
d	e	f
15	10	11

2 How many more white circles than green triangles are there?




a	b	c
26	12	22
d	e	f
15	23	17

3 How many more purple circles than white triangles are there?



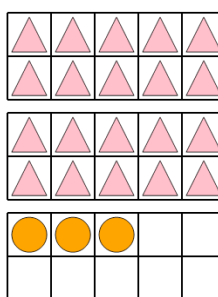
a	b	c
27	12	18
d	e	f
9	15	19

4 How many more yellow squares than pink triangles are there?



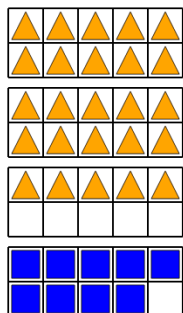
a	b	c
24	8	11
d	e	f
15	6	17

5 How many more pink triangles than orange circles are there?




a	b	c
14	17	22
d	e	f
19	8	11

6 How many more orange triangles than blue squares are there?



a	b	c
20	23	6
d	e	f
17	16	12

7 How many more yellow triangles than green squares are there?



a	b	c
8	24	11
d	e	f
14	19	18