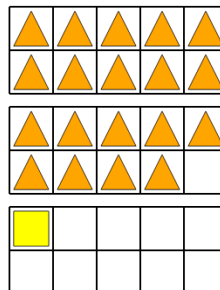




Math worksheet on 'Ten Groups - Subtract, Without Borrow, Less than 20 (Level 1)'. Part of a broader unit on 'Ten Groups - Counting'

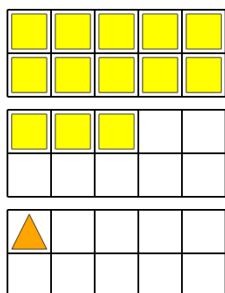
Learn online: app.mobius.academy/math/units/ten_groups_counting_intro/

1 How many more orange triangles than yellow squares are there?



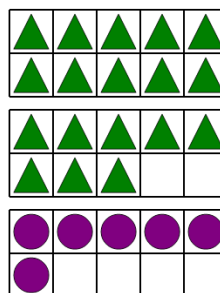
a	b	c
15	13	19
d	e	f
22	23	18

2 How many more yellow squares than orange triangles are there?



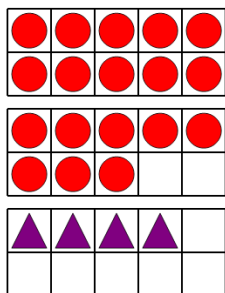
a	b	c
5	21	12
d	e	f
16	20	17

3 How many more green triangles than purple circles are there?



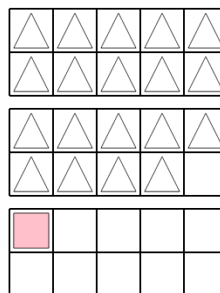
a	b	c
12	13	5
d	e	f
14	7	19

4 How many more red circles than purple triangles are there?



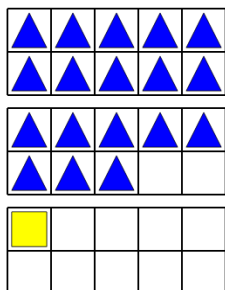
a	b	c
16	7	22
d	e	f
5	14	12

5 How many more white triangles than pink squares are there?



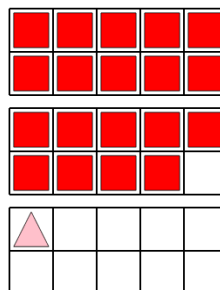
a	b	c
10	20	27
d	e	f
18	17	12

6 How many more blue triangles than yellow squares are there?



a	b	c
13	9	18
d	e	f
17	23	19

7 How many more red squares than pink triangles are there?



a	b	c
13	20	18
d	e	f
22	19	27