

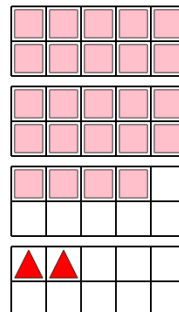


Math worksheet on 'Ten Groups - Subtract, Without Borrow, Less than 30 (Level 1)'. Part of a broader unit on 'Addition and Subtraction of Integers - 1 and 2 Digit'

Learn online:


[app.mobius.academy/math/units/addition\\_and\\_subtraction\\_integers\\_1\\_and\\_2\\_digit/](http://app.mobius.academy/math/units/addition_and_subtraction_integers_1_and_2_digit/)

1 How many more pink squares than red triangles are there?



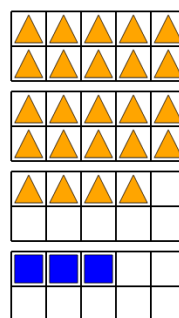
a	b	c
40	22	36
d	e	f
4	6	34

2 How many more blue squares than red triangles are there?




a	b	c
45	27	43
d	e	f
19	9	11

3 How many more orange triangles than blue squares are there?




a	b	c
31	21	39
d	e	f
9	27	5

4 How many more green squares than red circles are there?



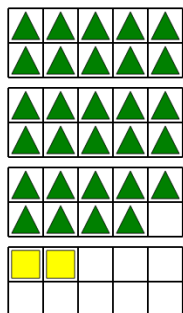
a	b	c
29	23	7
d	e	f
33	27	11

5 How many more yellow triangles than green squares are there?



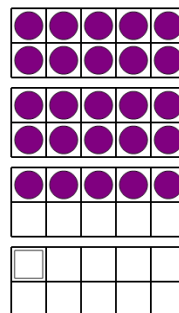
a	b	c
37	25	13
d	e	f
29	9	23

6 How many more green triangles than yellow squares are there?



a	b	c
29	27	23
d	e	f
17	39	33

7 How many more purple circles than white squares are there?



a	b	c
24	36	26
d	e	f
12	22	30