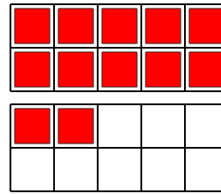




Math worksheet on 'Ten Groups - To Next Ten, One Digit, Less than 20 (Level 1)'. Part of a broader unit on 'Ten Groups - Counting'

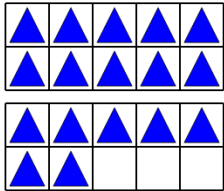
Learn online: app.mobius.academy/math/units/ten_groups_counting_intro/

1 How many more red squares are needed to have 20



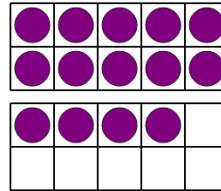
a	b	c
10	11	5
d	e	f
15	8	4

2 How many more blue triangles are needed to have 20



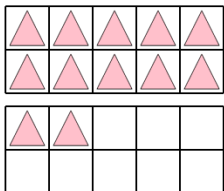
a	b	c
7	5	10
d	e	f
3	1	4

3 How many more purple circles are needed to have 20



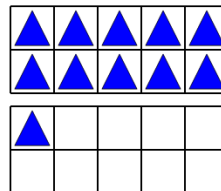
a	b	c
11	6	3
d	e	f
2	10	13

4 How many more pink triangles are needed to have 20



a	b	c
8	9	1
d	e	f
6	3	10

5 How many more blue triangles are needed to have 20



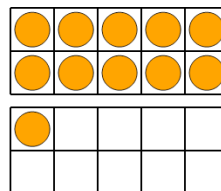
a	b	c
17	8	9
d	e	f
7	16	15

6 How many more purple squares are needed to have 20



a	b	c
8	2	15
d	e	f
16	12	4

7 How many more orange circles are needed to have 20



a	b	c
15	3	16
d	e	f
18	9	12