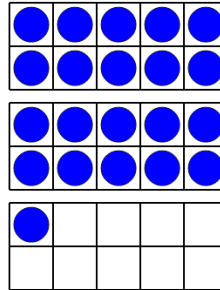




Math worksheet on 'Ten Groups - To Next Ten, One Digit, Less than 30 (Level 1)'. Part of a broader unit on 'Ten Groups - Counting'


Learn online: app.mobius.academy/math/units/ten_groups_counting_intro/

1 How many more blue circles are needed to have 30



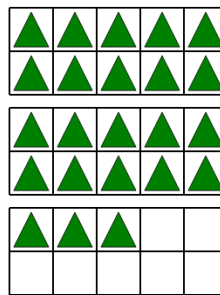
| a | b | c |
|----|---|---|
| 11 | 2 | 3 |
| d | e | f |
| 15 | 9 | 1 |

2 How many more white triangles are needed to have 30




| a | b | c |
|----|---|---|
| 10 | 4 | 7 |
| d | e | f |
| 2 | 5 | 8 |

3 How many more green triangles are needed to have 30




| a | b | c |
|----|---|----|
| 11 | 8 | 14 |
| d | e | f |
| 1 | 4 | 7 |

4 How many more white squares are needed to have 30




| a | b | c |
|----|----|----|
| 8 | 3 | 6 |
| d | e | f |
| 10 | 12 | 15 |

5 How many more purple triangles are needed to have 30




| a | b | c |
|---|----|---|
| 2 | 1 | 4 |
| d | e | f |
| 5 | 11 | 3 |

6 How many more red circles are needed to have 30



| a | b | c |
|---|---|----|
| 2 | 9 | 12 |
| d | e | f |
| 5 | 4 | 6 |

7 How many more red circles are needed to have 30



| a | b | c |
|---|---|----|
| 7 | 6 | 3 |
| d | e | f |
| 5 | 2 | 12 |