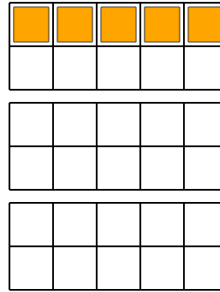




Math worksheet on 'Ten Groups - To Next Ten, Two Digits, Less than 30 (Level 1)'. Part of a broader unit on 'Ten Groups - Counting'


Learn online: [app.mobius.academy/math/units/ten\\_groups\\_counting\\_intro/](http://app.mobius.academy/math/units/ten_groups_counting_intro/)

**1** How many more orange squares are needed to have 30



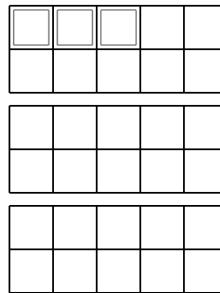
<b>a</b>	<b>b</b>	<b>c</b>
25	19	5
<b>d</b>	<b>e</b>	<b>f</b>
39	15	9

**2** How many more green squares are needed to have 30



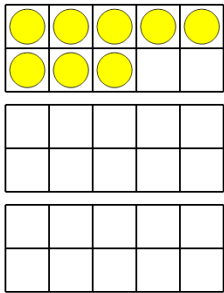
<b>a</b>	<b>b</b>	<b>c</b>
27	21	9
<b>d</b>	<b>e</b>	<b>f</b>
17	11	25

**3** How many more white squares are needed to have 30



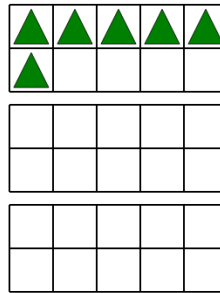
<b>a</b>	<b>b</b>	<b>c</b>
25	45	21
<b>d</b>	<b>e</b>	<b>f</b>
27	11	41

**4** How many more yellow circles are needed to have 30




<b>a</b>	<b>b</b>	<b>c</b>
8	22	26
<b>d</b>	<b>e</b>	<b>f</b>
12	18	10

**5** How many more green triangles are needed to have 30



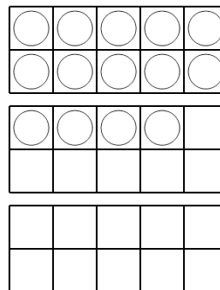
<b>a</b>	<b>b</b>	<b>c</b>
12	24	40
<b>d</b>	<b>e</b>	<b>f</b>
18	28	20

**6** How many more red squares are needed to have 30



<b>a</b>	<b>b</b>	<b>c</b>
23	17	11
<b>d</b>	<b>e</b>	<b>f</b>
26	10	21

**7** How many more white circles are needed to have 30



<b>a</b>	<b>b</b>	<b>c</b>
16	9	14
<b>d</b>	<b>e</b>	<b>f</b>
8	11	15