




Math worksheet on 'Time - Elapsed - Clock and Hours & Minutes to Clock - Five Minutes (Level 2)'.
Part of a broader unit on 'Time - Elapsed Time - Advanced'

Learn online: app.mobius.academy/math/units/time_elapsed_advanced/

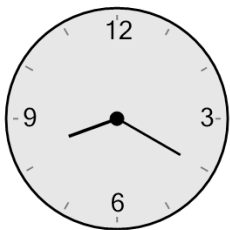
1 What will the time be after the given change?



Add 5 mins

a 	b 	c
d 	e 	f

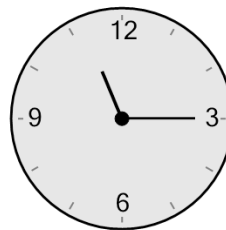
2 What will the time be after the given change?



Add 1 hr 30 mins

a 	b 	c
d 	e 	f

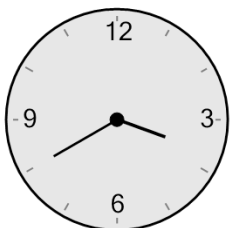
3 What will the time be after the given change?



Add 25 mins

a 	b 	c
d 	e 	f


4 What will the time be after the given change?



Add 40 mins

a 	b 	c
d 	e 	f


5 What will the time be after the given change?



Add 50 mins

a 	b 	c
d 	e 	f

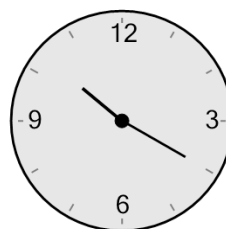
6 What will the time be after the given change?



Add 10 mins

a 	b 	c
d 	e 	f

7 What will the time be after the given change?



Add 20 mins

a 	b 	c
d 	e 	f