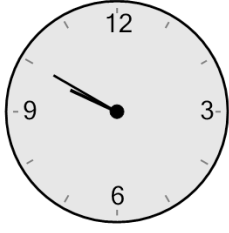




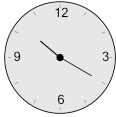
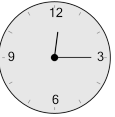

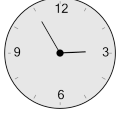


Math worksheet on 'Time - Elapsed - Clock and Hours & Minutes to Clock - Five Minutes (Level 3)'. Part of a broader unit on 'Time - Elapsed Time - Advanced'

Learn online: app.mobius.academy/math/units/time_elapsed_advanced/

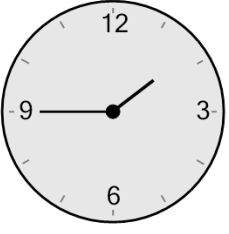
1 What will the time be after the given change?



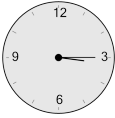
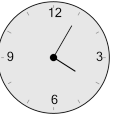
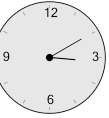
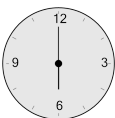
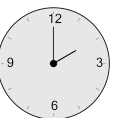

Add 45 mins

a 	b 	c 
d 	e 	f 


2 What will the time be after the given change?






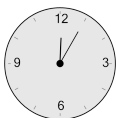
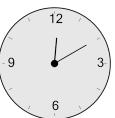

Add 15 mins

a 	b 	c 
d 	e 	f 

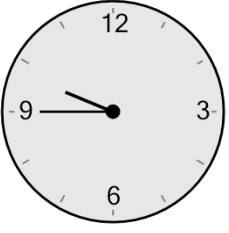
3 What will the time be after the given change?



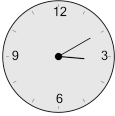
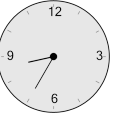


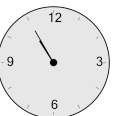

Add 1 hr 55 mins

a 	b 	c 
d 	e 	f 

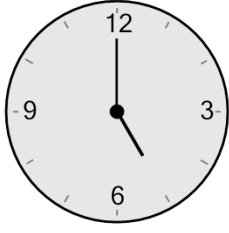
4 What will the time be after the given change?







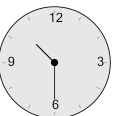

Add 1 hr 10 mins

a 	b 	c 
d 	e 	f 

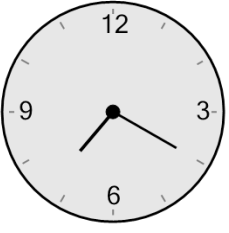
5 What will the time be after the given change?



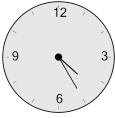

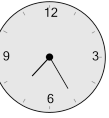
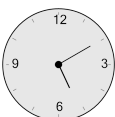
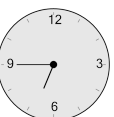

Add 2 hrs 55 mins

a 	b 	c 
d 	e 	f 

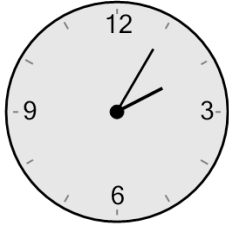
6 What will the time be after the given change?





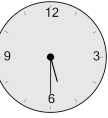
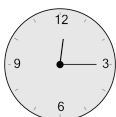
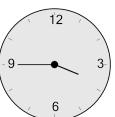
Add 5 mins

a 	b 	c 
d 	e 	f 

7 What will the time be after the given change?



Add 35 mins

a 	b 	c 
d 	e 	f 