




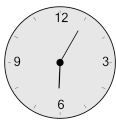
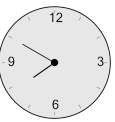


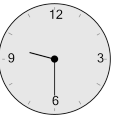
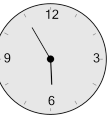
Math worksheet on 'Time - Elapsed - Clock and Hours & Minutes to Clock - One Minutes (Level 1)'.
Part of a broader unit on 'Time - Elapsed Time - Advanced'

Learn online: app.mobius.academy/math/units/time_elapsed_advanced/

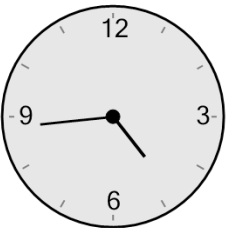
1 What will the time be after the given change?




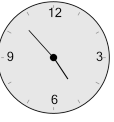



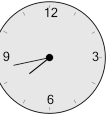
Add 35 mins

a 	b 	c 
d 	e 	f 

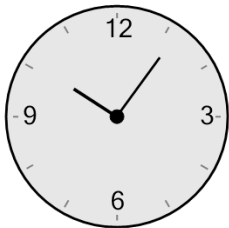
2 What will the time be after the given change?



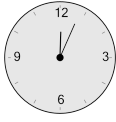
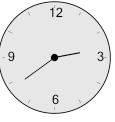
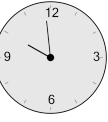
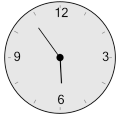

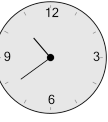
Add 4 mins

a 	b 	c 
d 	e 	f 

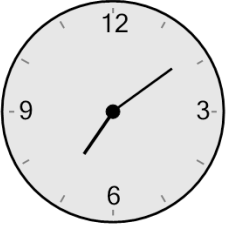
3 What will the time be after the given change?



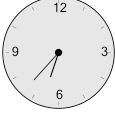
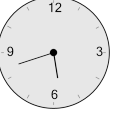

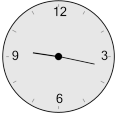
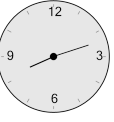

Add 48 mins

a 	b 	c 
d 	e 	f 


4 What will the time be after the given change?



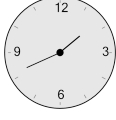
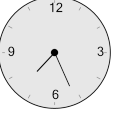



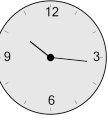
Add 18 mins

a 	b 	c 
d 	e 	f 

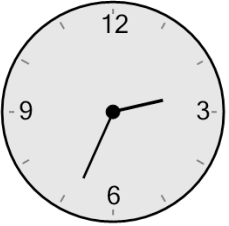
5 What will the time be after the given change?



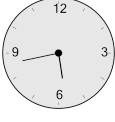


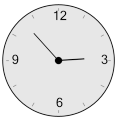
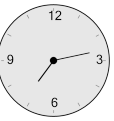
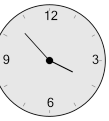
Add 13 mins

a 	b 	c 
d 	e 	f 


6 What will the time be after the given change?



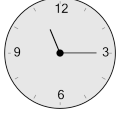
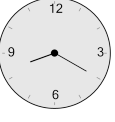



Add 19 mins

a 	b 	c 
d 	e 	f 

7 What will the time be after the given change?



Add 29 mins

a 	b 	c 
d 	e 	f 