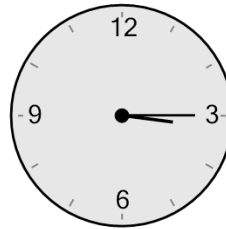




Math worksheet on 'Time - Elapsed - Clock and Hours & Minutes to Clock - Quarter Hours (Level 1)'.
Part of a broader unit on 'Time - Elapsed Time - Advanced'

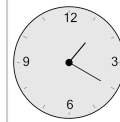
Learn online: app.mobius.academy/math/units/time_elapsed_advanced/

1 What will the time be after the given change?

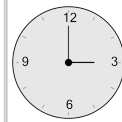


Add 30 mins

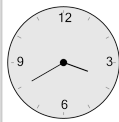
a



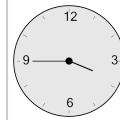
b



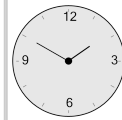
c



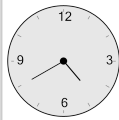
d



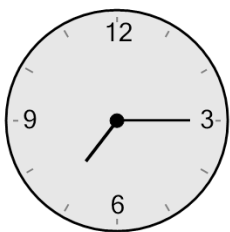
e



f

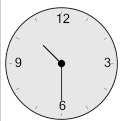


2 What will the time be after the given change?

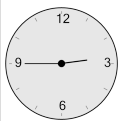


Add 15 mins

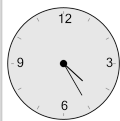
a



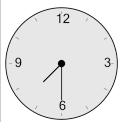
b



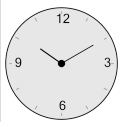
c



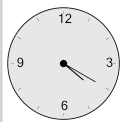
d




e



f

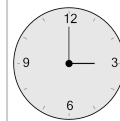


3 What will the time be after the given change?

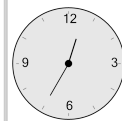


Add 45 mins

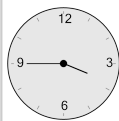
a



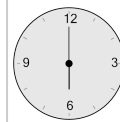
b



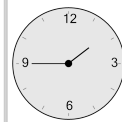
c



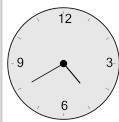
d



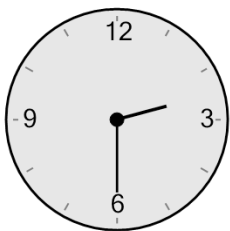
e



f

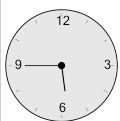


4 What will the time be after the given change?

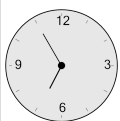


Add 15 mins

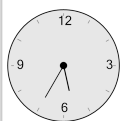
a



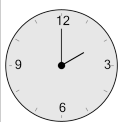
b



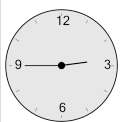
c



d




e



f

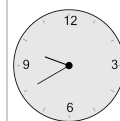


5 What will the time be after the given change?

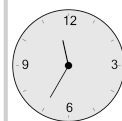


Add 45 mins

a



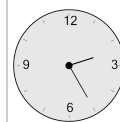
b



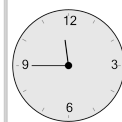
c



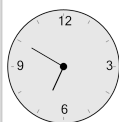
d



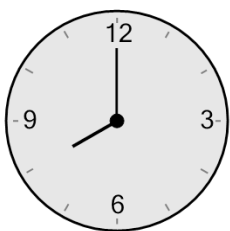
e



f

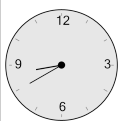


6 What will the time be after the given change?

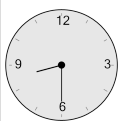


Add 30 mins

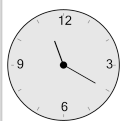
a



b



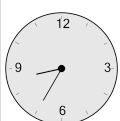
c



d



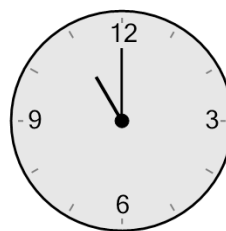
e



f

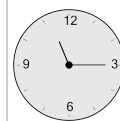


7 What will the time be after the given change?

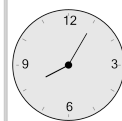


Add 15 mins

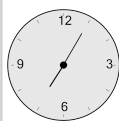
a



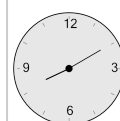
b



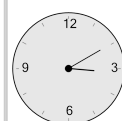
c



d



e



f

