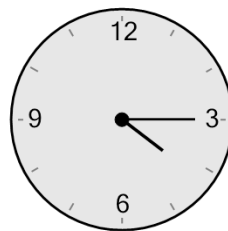




Math worksheet on 'Time - Elapsed - Clock and Hours & Minutes to Clock - Quarter Hours (Level 3)'.
Part of a broader unit on 'Time - Elapsed Time - Advanced'

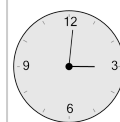
Learn online: app.mobius.academy/math/units/time_elapsed_advanced/

1 What will the time be after the given change?

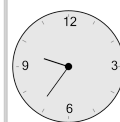


Add 1 hr 1 min

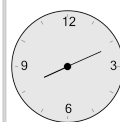
a



b




c



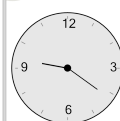
d



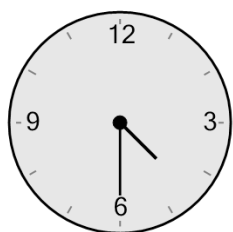
e



f

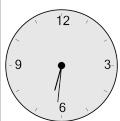


2 What will the time be after the given change?



Add 2 hrs 1 min

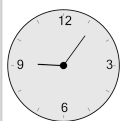
a



b



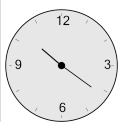
c



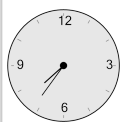
d




e



f

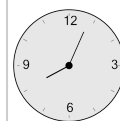


3 What will the time be after the given change?

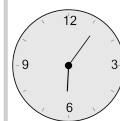


Add 1 min

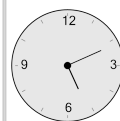
a



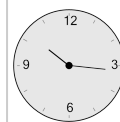
b



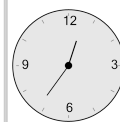
c



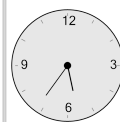
d



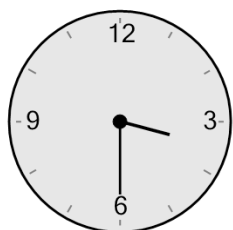
e



f

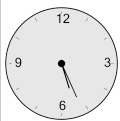


4 What will the time be after the given change?

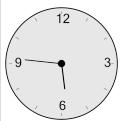


Add 1 hr 1 min

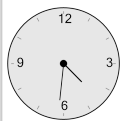
a



b



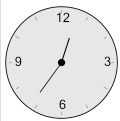
c



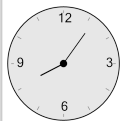
d



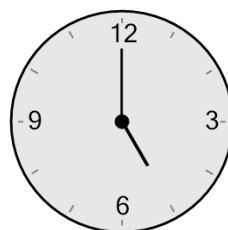
e



f

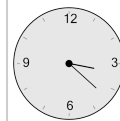


5 What will the time be after the given change?

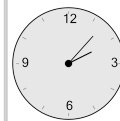


Add 2 hrs 3 mins

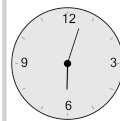
a



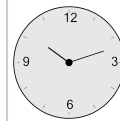
b



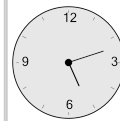
c



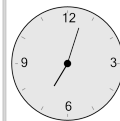
d



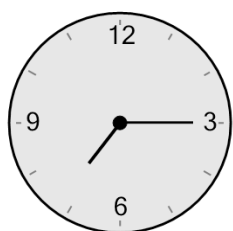
e



f



6 What will the time be after the given change?



Add 1 hr 2 mins

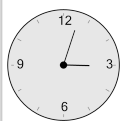
a



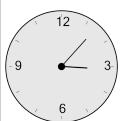
b



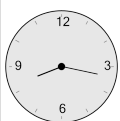
c



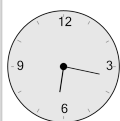
d



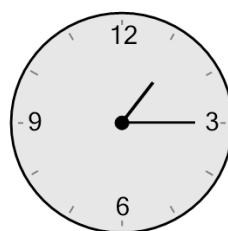
e



f

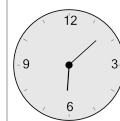


7 What will the time be after the given change?

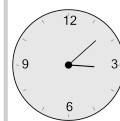


Add 2 hrs 2 mins

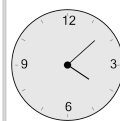
a



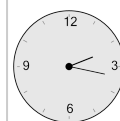
b



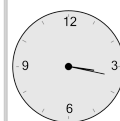
c



d



e



f

