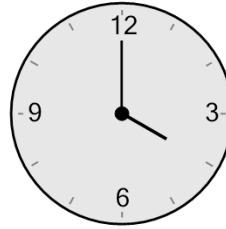




Math worksheet on 'Time - Elapsed - Clock and Minutes to Clock - Full Hours (Level 2)'. Part of a broader unit on 'Time - Elapsed Time - Practice'

Learn online: [app.mobius.academy/math/units/time\\_elapsed\\_practice/](http://app.mobius.academy/math/units/time_elapsed_practice/)

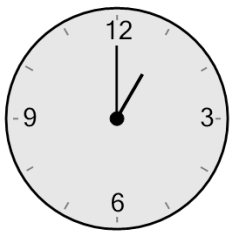
**1** What will the time be after the given change?



Add 120 mins

<b>a</b> 	<b>b</b> 	<b>c</b> 
<b>d</b> 	<b>e</b> 	<b>f</b> 


**2** What will the time be after the given change?



Add 180 mins

<b>a</b> 	<b>b</b> 	<b>c</b> 
<b>d</b> 	<b>e</b> 	<b>f</b> 

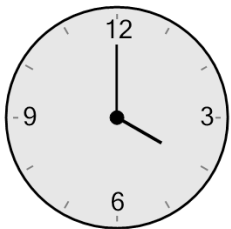
**3** What will the time be after the given change?



Add 180 mins

<b>a</b> 	<b>b</b> 	<b>c</b> 
<b>d</b> 	<b>e</b> 	<b>f</b> 


**4** What will the time be after the given change?



Add 180 mins

<b>a</b> 	<b>b</b> 	<b>c</b> 
<b>d</b> 	<b>e</b> 	<b>f</b> 

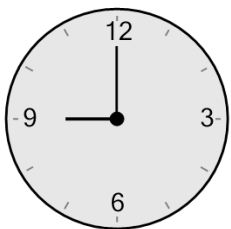
**5** What will the time be after the given change?



Add 120 mins

<b>a</b> 	<b>b</b> 	<b>c</b> 
<b>d</b> 	<b>e</b> 	<b>f</b> 

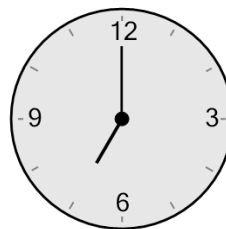
**6** What will the time be after the given change?



Add 180 mins

<b>a</b> 	<b>b</b> 	<b>c</b> 
<b>d</b> 	<b>e</b> 	<b>f</b> 

**7** What will the time be after the given change?



Add 180 mins

<b>a</b> 	<b>b</b> 	<b>c</b> 
<b>d</b> 	<b>e</b> 	<b>f</b> 