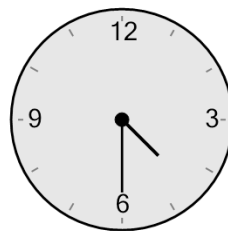




Math worksheet on 'Time - Elapsed Negative - Clock and Hours & Minutes to Clock - Five Minutes (Level 3)'. Part of a broader unit on 'Time - Elapsed Time, Negative - Advanced'

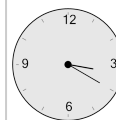
Learn online: app.mobius.academy/math/units/time_elapsed_negative_advanced/

1 What will the time be after the given change?

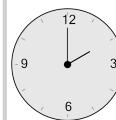


Subtract 2 hrs 30 mins

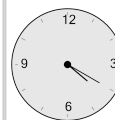
a



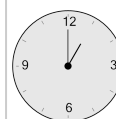
b



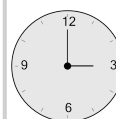
c



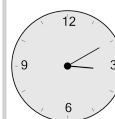
d



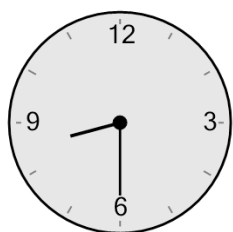
e



f

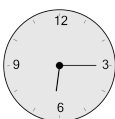


2 What will the time be after the given change?

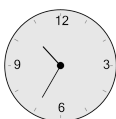


Subtract 1 hr 50 mins

a



b



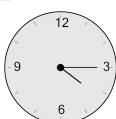
c



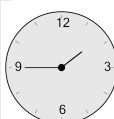
d



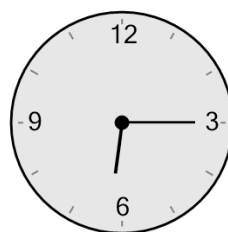
e



f

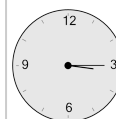


3 What will the time be after the given change?

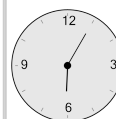


Subtract 1 hr 10 mins

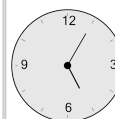
a



b



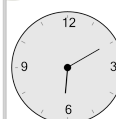
c



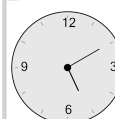
d



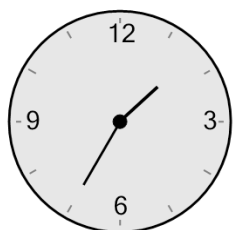
e



f

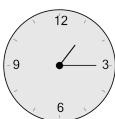


4 What will the time be after the given change?



Subtract 20 mins

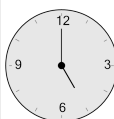
a



b



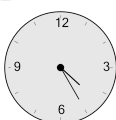
c



d



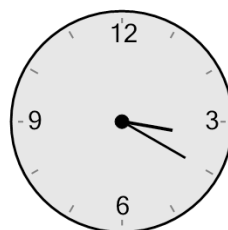
e



f

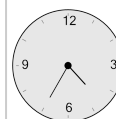


5 What will the time be after the given change?

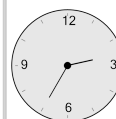


Subtract 1 hr 5 mins

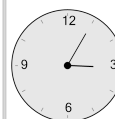
a



b



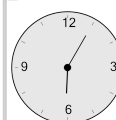
c




d



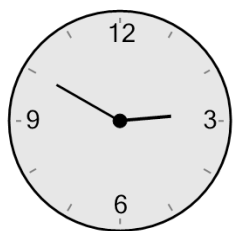
e



f

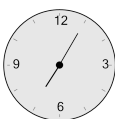


6 What will the time be after the given change?



Subtract 5 mins

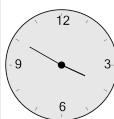
a



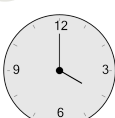
b



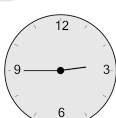
c



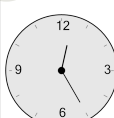
d



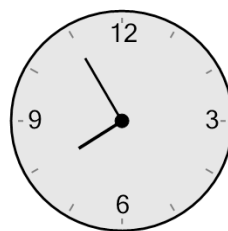
e



f

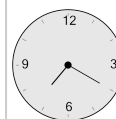


7 What will the time be after the given change?

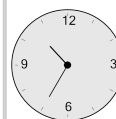


Subtract 1 hr 25 mins

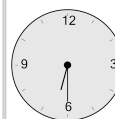
a



b



c



d



e



f

