




Math worksheet on 'Time - Elapsed Negative - Clock and Hours & Minutes to Clock - Full Hours (Level 2)'.
Part of a broader unit on 'Time - Elapsed Time, Negative - Intro'

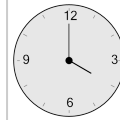
Learn online: app.mobius.academy/math/units/time_elapsed_negative_intro/

1 What will the time be after the given change?

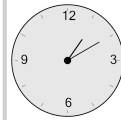


Subtract 3 hrs

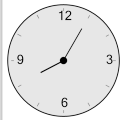
a



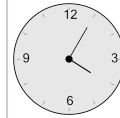
b



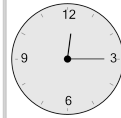
c



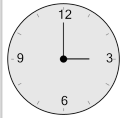
d



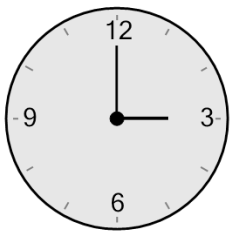
e



f

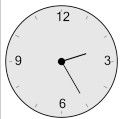


2 What will the time be after the given change?

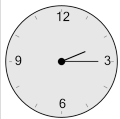


Subtract 2 hrs

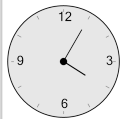
a



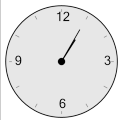
b



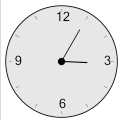
c



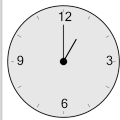
d




e



f

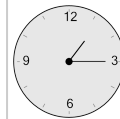


3 What will the time be after the given change?

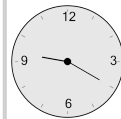


Subtract 3 hrs

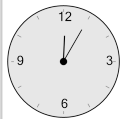
a



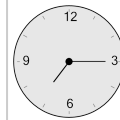
b



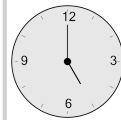
c



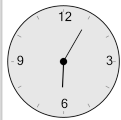
d



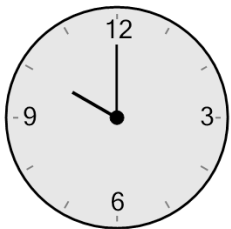
e



f

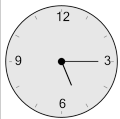


4 What will the time be after the given change?

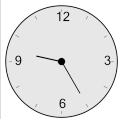


Subtract 1 hr

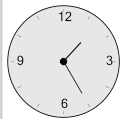
a



b



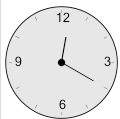
c



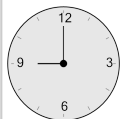
d




e



f

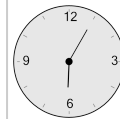


5 What will the time be after the given change?

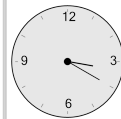


Subtract 2 hrs

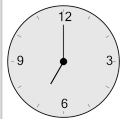
a



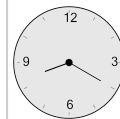
b



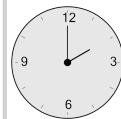
c



d



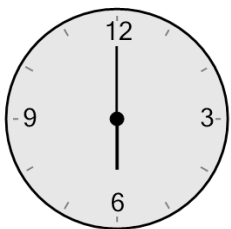
e



f

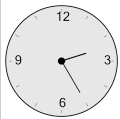


6 What will the time be after the given change?

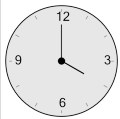


Subtract 2 hrs

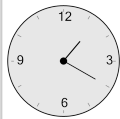
a



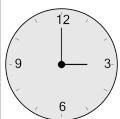
b



c



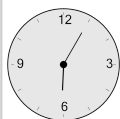
d



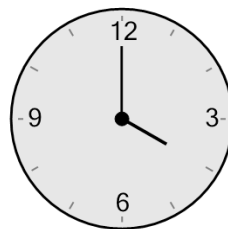
e



f

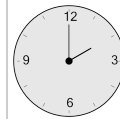


7 What will the time be after the given change?

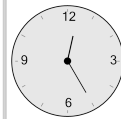


Subtract 2 hrs

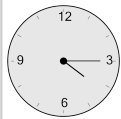
a



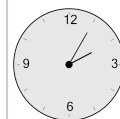
b



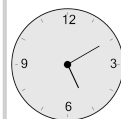
c



d



e



f

