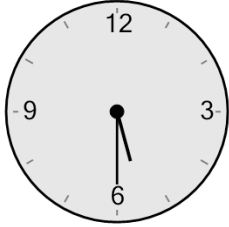




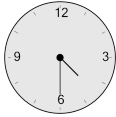
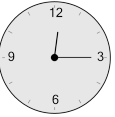
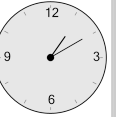

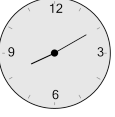
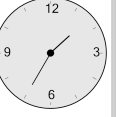
Math worksheet on 'Time - Elapsed Negative - Clock and Hours & Minutes to Clock - Half Hours (Level 3)'. Part of a broader unit on 'Time - Elapsed Time, Negative - Intro'

Learn online: app.mobius.academy/math/units/time_elapsed_negative_intro/

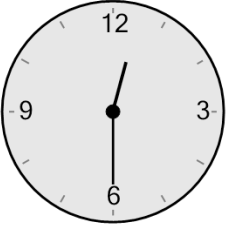
1 What will the time be after the given change?




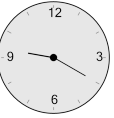
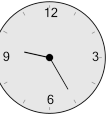
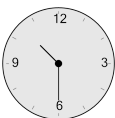
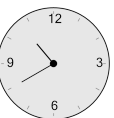
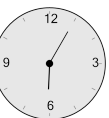
Subtract 1 hr

a 	b 	c 
d 	e 	f 

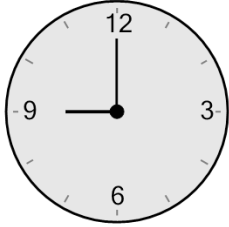
2 What will the time be after the given change?




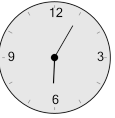
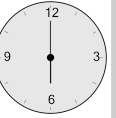

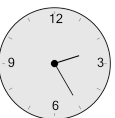
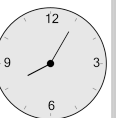
Subtract 2 hrs

a 	b 	c 
d 	e 	f 

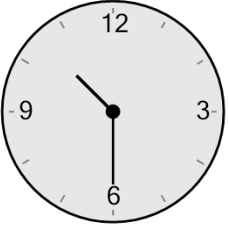
3 What will the time be after the given change?



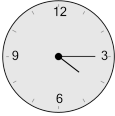

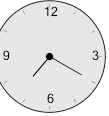
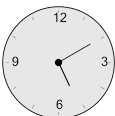
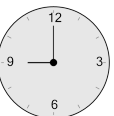

Subtract 2 hrs

a 	b 	c 
d 	e 	f 

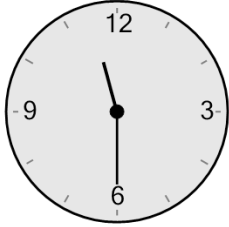
4 What will the time be after the given change?




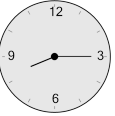
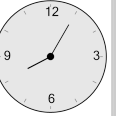

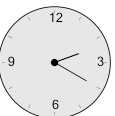
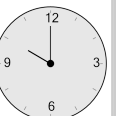
Subtract 1 hr 30 mins

a 	b 	c 
d 	e 	f 

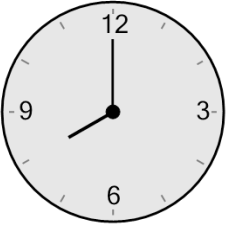
5 What will the time be after the given change?



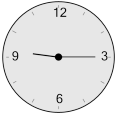

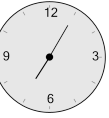


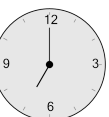
Subtract 1 hr 30 mins

a 	b 	c 
d 	e 	f 

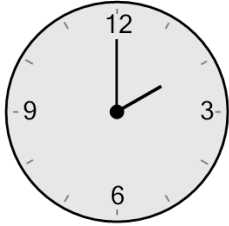
6 What will the time be after the given change?




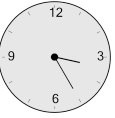
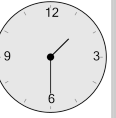

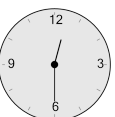
Subtract 1 hr

a 	b 	c 
d 	e 	f 

7 What will the time be after the given change?



Subtract 30 mins

a 	b 	c 
d 	e 	f 