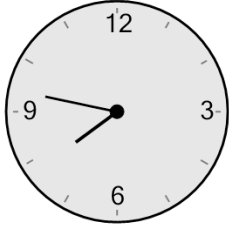





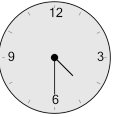
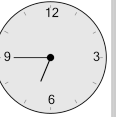
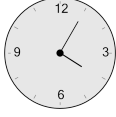
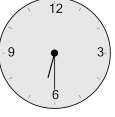
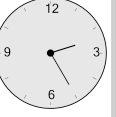
Math worksheet on 'Time - Elapsed Negative - Clock and Hours & Minutes to Clock - Quarter Hours (Level 2)'. Part of a broader unit on 'Time - Elapsed Time, Negative - Practice'

Learn online: [app.mobius.academy/math/units/time\\_elapsed\\_negative\\_practice/](http://app.mobius.academy/math/units/time_elapsed_negative_practice/)

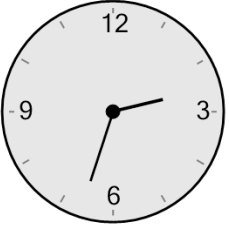
**1** What will the time be after the given change?




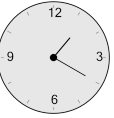
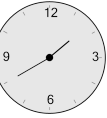
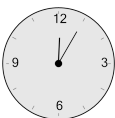
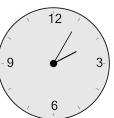

Subtract 1 hr 2 mins

<b>a</b> 	<b>b</b> 	<b>c</b> 
<b>d</b> 	<b>e</b> 	<b>f</b> 

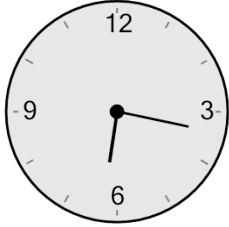
**2** What will the time be after the given change?





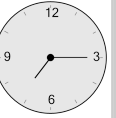
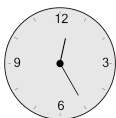
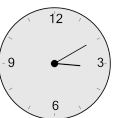
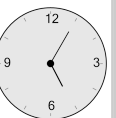
Subtract 3 mins

<b>a</b> 	<b>b</b> 	<b>c</b> 
<b>d</b> 	<b>e</b> 	<b>f</b> 

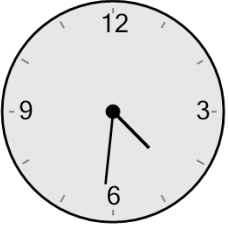
**3** What will the time be after the given change?




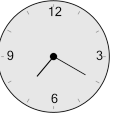
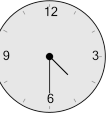
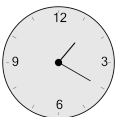
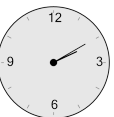

Subtract 1 hr 2 mins

<b>a</b> 	<b>b</b> 	<b>c</b> 
<b>d</b> 	<b>e</b> 	<b>f</b> 

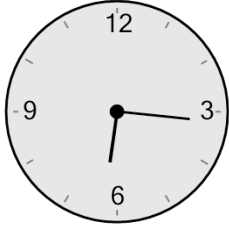
**4** What will the time be after the given change?





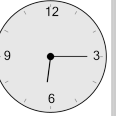

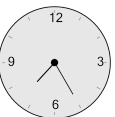
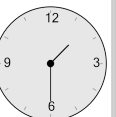
Subtract 1 min

<b>a</b> 	<b>b</b> 	<b>c</b> 
<b>d</b> 	<b>e</b> 	<b>f</b> 

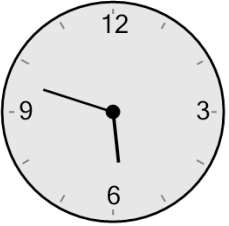
**5** What will the time be after the given change?




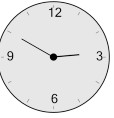
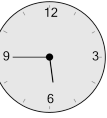



Subtract 1 min

<b>a</b> 	<b>b</b> 	<b>c</b> 
<b>d</b> 	<b>e</b> 	<b>f</b> 

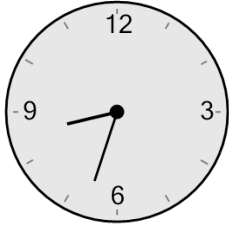
**6** What will the time be after the given change?




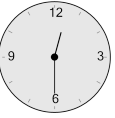
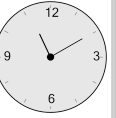
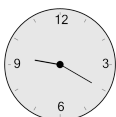
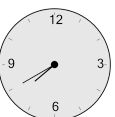
Subtract 3 mins

<b>a</b> 	<b>b</b> 	<b>c</b> 
<b>d</b> 	<b>e</b> 	<b>f</b> 

**7** What will the time be after the given change?



Subtract 3 mins

<b>a</b> 	<b>b</b> 	<b>c</b> 
<b>d</b> 	<b>e</b> 	<b>f</b> 