





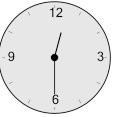
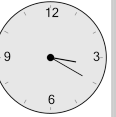
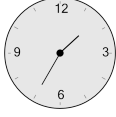

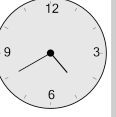
Math worksheet on 'Time - Elapsed Negative - Clock and Minutes to Clock - Five Minutes (Level 1)'. Part of a broader unit on 'Time - Elapsed Time, Negative - Intro'

Learn online: app.mobius.academy/math/units/time_elapsed_negative_intro/

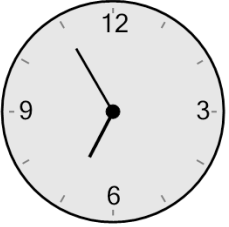
1 What will the time be after the given change?



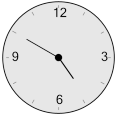

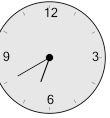
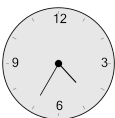
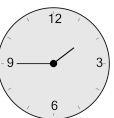
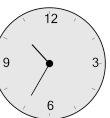
Subtract 15 min

| | | |
|---|---|---|
| a  | b  | c  |
| d  | e  | f  |


2 What will the time be after the given change?




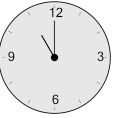
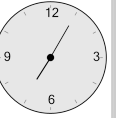

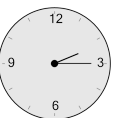
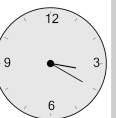
Subtract 15 min

| | | |
|---|---|---|
| a  | b  | c  |
| d  | e  | f  |

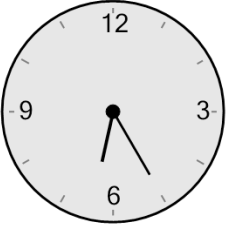
3 What will the time be after the given change?





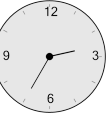
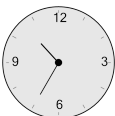
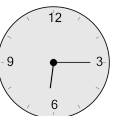

Subtract 50 min

| | | |
|---|---|---|
| a  | b  | c  |
| d  | e  | f  |

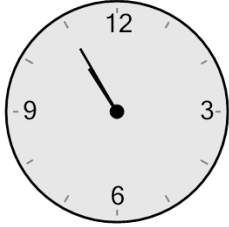
4 What will the time be after the given change?




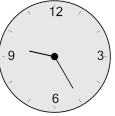
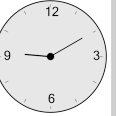

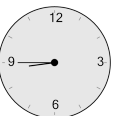
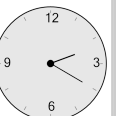
Subtract 10 min

| | | |
|---|---|---|
| a  | b  | c  |
| d  | e  | f  |

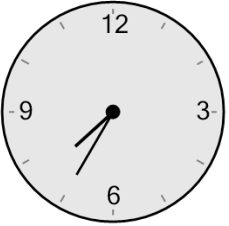
5 What will the time be after the given change?



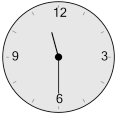
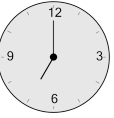

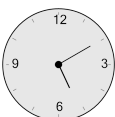
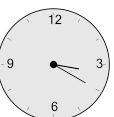
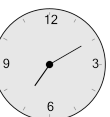
Subtract 30 min

| | | |
|---|---|---|
| a  | b  | c  |
| d  | e  | f  |

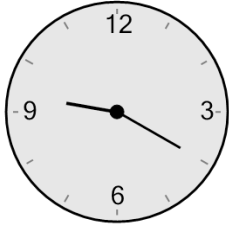
6 What will the time be after the given change?





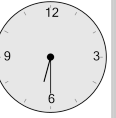

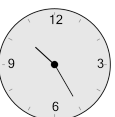
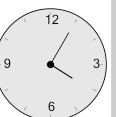
Subtract 25 min

| | | |
|---|---|---|
| a  | b  | c  |
| d  | e  | f  |

7 What will the time be after the given change?



Subtract 5 min

| | | |
|---|---|---|
| a  | b  | c  |
| d  | e  | f  |