




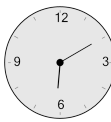

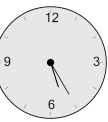
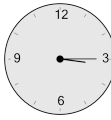


Math worksheet on 'Time - Elapsed Negative - Clock and Minutes to Clock - Full Hours (Level 2)'. Part of a broader unit on 'Time - Elapsed Time, Negative - Intro'

Learn online: [app.mobius.academy/math/units/time\\_elapsed\\_negative\\_intro/](http://app.mobius.academy/math/units/time_elapsed_negative_intro/)

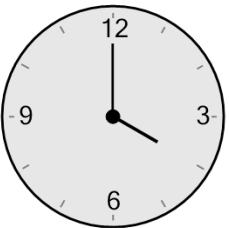
**1** What will the time be after the given change?




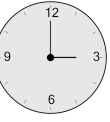


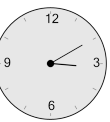

Subtract 120 min

|   |   |   |
|---|---|---|
| <b>a</b><br> | <b>b</b><br> | <b>c</b><br> |
| <b>d</b><br> | <b>e</b><br> | <b>f</b><br> |

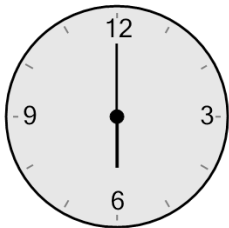
**2** What will the time be after the given change?



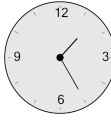


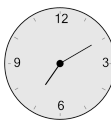


Subtract 60 min

|   |   |   |
|---|---|---|
| <b>a</b><br> | <b>b</b><br> | <b>c</b><br> |
| <b>d</b><br> | <b>e</b><br> | <b>f</b><br> |

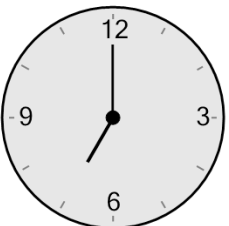
**3** What will the time be after the given change?




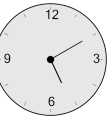
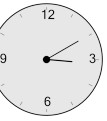
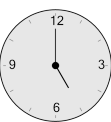

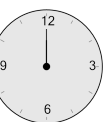
Subtract 180 min

|   |   |   |
|---|---|---|
| <b>a</b><br> | <b>b</b><br> | <b>c</b><br> |
| <b>d</b><br> | <b>e</b><br> | <b>f</b><br> |

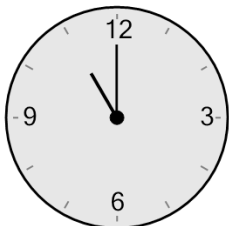
**4** What will the time be after the given change?








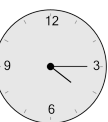
Subtract 120 min

|   |   |   |
|---|---|---|
| <b>a</b><br> | <b>b</b><br> | <b>c</b><br> |
| <b>d</b><br> | <b>e</b><br> | <b>f</b><br> |

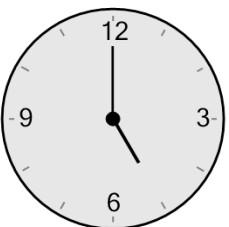
**5** What will the time be after the given change?



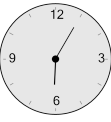




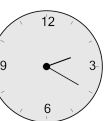
Subtract 180 min

|   |   |   |
|---|---|---|
| <b>a</b><br> | <b>b</b><br> | <b>c</b><br> |
| <b>d</b><br> | <b>e</b><br> | <b>f</b><br> |

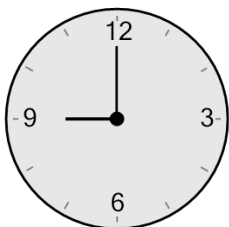
**6** What will the time be after the given change?



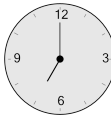


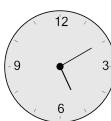

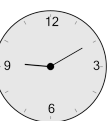
Subtract 180 min

|   |   |   |
|---|---|---|
| <b>a</b><br> | <b>b</b><br> | <b>c</b><br> |
| <b>d</b><br> | <b>e</b><br> | <b>f</b><br> |

**7** What will the time be after the given change?



Subtract 120 min

|   |   |   |
|---|---|---|
| <b>a</b><br> | <b>b</b><br> | <b>c</b><br> |
| <b>d</b><br> | <b>e</b><br> | <b>f</b><br> |