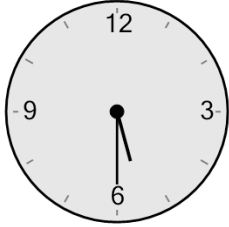




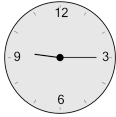

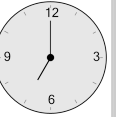
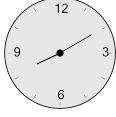
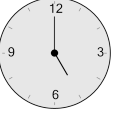
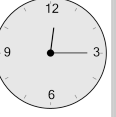
Math worksheet on 'Time - Elapsed Negative - Clock and Minutes to Clock - Half Hours (Level 1)'. Part of a broader unit on 'Time - Elapsed Time - Basics'

Learn online: app.mobius.academy/math/units/time_elapsed_basics/

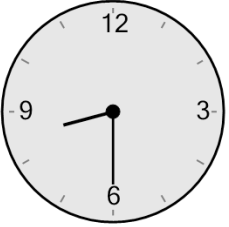
1 What will the time be after the given change?



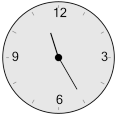

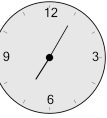
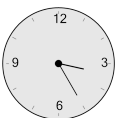
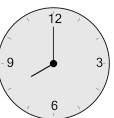
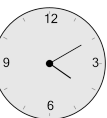
Subtract 30 min

a 	b 	c 
d 	e 	f 

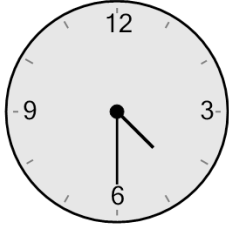
2 What will the time be after the given change?



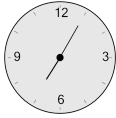
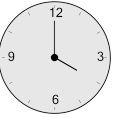
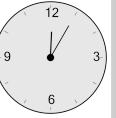

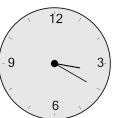
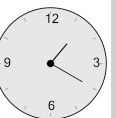
Subtract 30 min

a 	b 	c 
d 	e 	f 

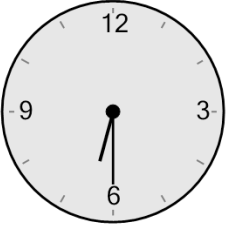
3 What will the time be after the given change?



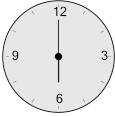
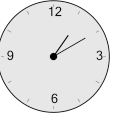

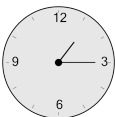
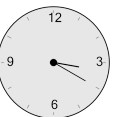
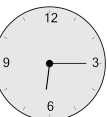
Subtract 30 min

a 	b 	c 
d 	e 	f 

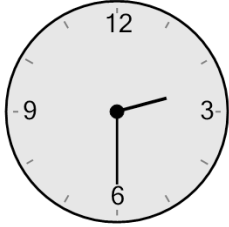
4 What will the time be after the given change?



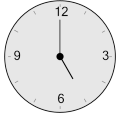

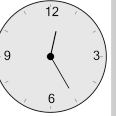

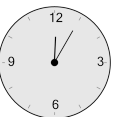
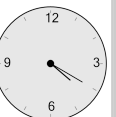
Subtract 30 min

a 	b 	c 
d 	e 	f 

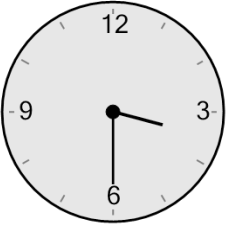
5 What will the time be after the given change?




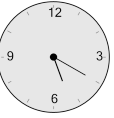

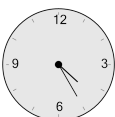
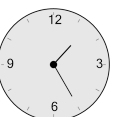
Subtract 30 min

a 	b 	c 
d 	e 	f 

6 What will the time be after the given change?



Subtract 30 min

a 	b 	c 
d 	e 	f 