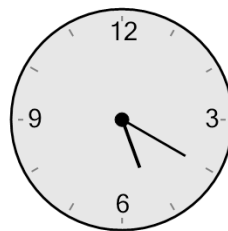




Math worksheet on 'Time - Elapsed Negative - Clock and Minutes to Clock - One Minutes (Level 1)'. Part of a broader unit on 'Time - Elapsed Time, Negative - Intro'

Learn online: app.mobius.academy/math/units/time_elapsed_negative_intro/

1 What will the time be after the given change?

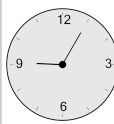


Subtract 15 min

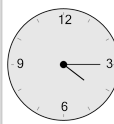
a



b



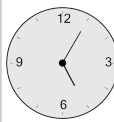
c



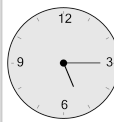
d



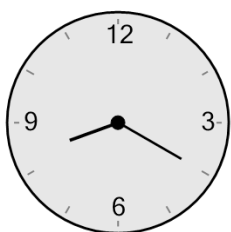
e



f



2 What will the time be after the given change?

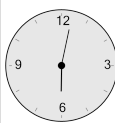


Subtract 7 min

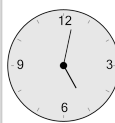
a



b



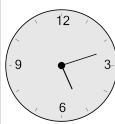
c



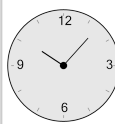
d



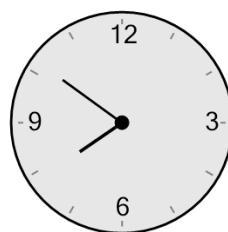
e



f



3 What will the time be after the given change?

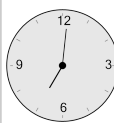


Subtract 50 min

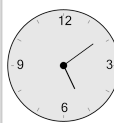
a



b



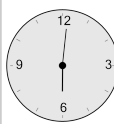
c



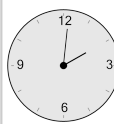
d



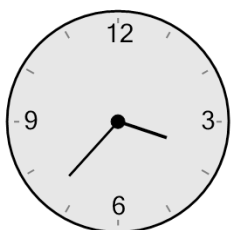
e



f

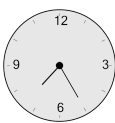


4 What will the time be after the given change?

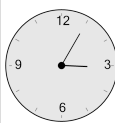


Subtract 32 min

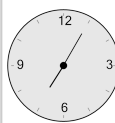
a



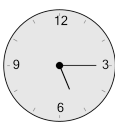
b



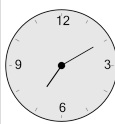
c



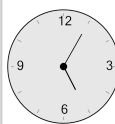
d




e



f



5 What will the time be after the given change?

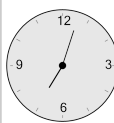


Subtract 24 min

a



b



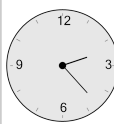
c



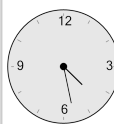
d



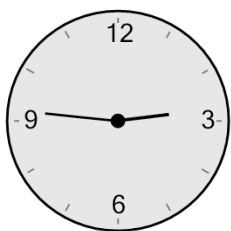
e



f

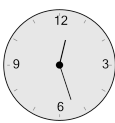


6 What will the time be after the given change?

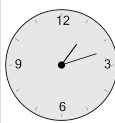


Subtract 19 min

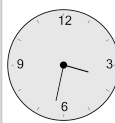
a



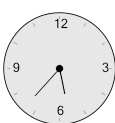
b



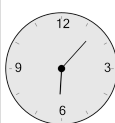
c



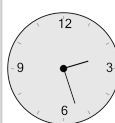
d



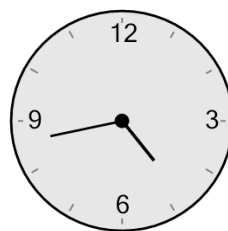
e



f



7 What will the time be after the given change?



Subtract 37 min

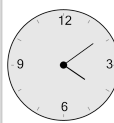
a



b



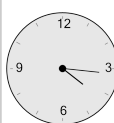
c



d



e



f

