




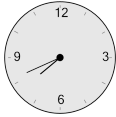
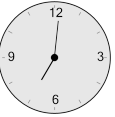
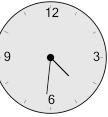
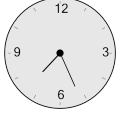


Math worksheet on 'Time - Elapsed Negative - Clock and Minutes to Clock - One Minutes (Level 2)'. Part of a broader unit on 'Time - Elapsed Time, Negative - Practice'

Learn online: app.mobius.academy/math/units/time_elapsed_negative_practice/

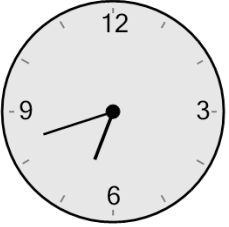
1 What will the time be after the given change?



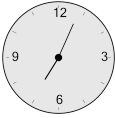

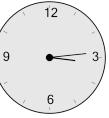

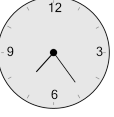
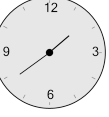
Subtract 70 min

a 	b 	c 
d 	e 	f 

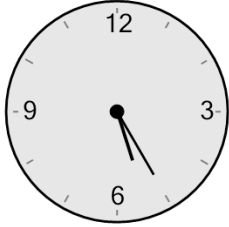
2 What will the time be after the given change?



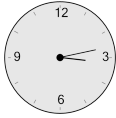





Subtract 23 min

a 	b 	c 
d 	e 	f 

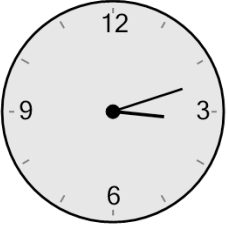
3 What will the time be after the given change?



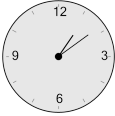
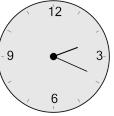

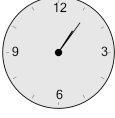
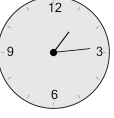

Subtract 73 min

a 	b 	c 
d 	e 	f 

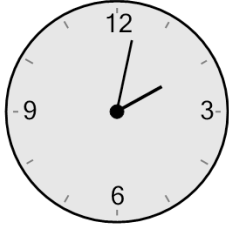
4 What will the time be after the given change?









Subtract 53 min

a 	b 	c 
d 	e 	f 

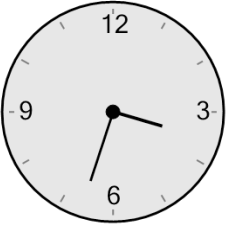
5 What will the time be after the given change?






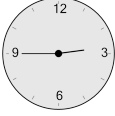


Subtract 14 min

a 	b 	c 
d 	e 	f 

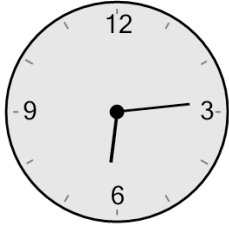
6 What will the time be after the given change?





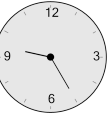
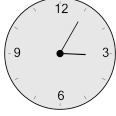

Subtract 48 min

a 	b 	c 
d 	e 	f 

7 What will the time be after the given change?



Subtract 69 min

a 	b 	c 
d 	e 	f 