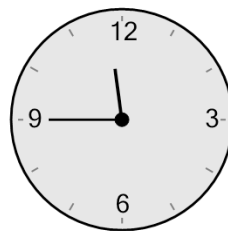




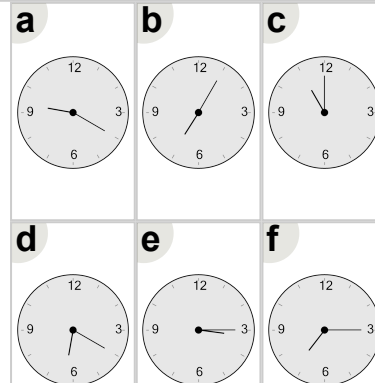
Math worksheet on 'Time - Elapsed Negative - Clock and Minutes to Clock - Quarter Hours (Level 1)'. Part of a broader unit on 'Time - Elapsed Time, Negative - Intro'

Learn online: [app.mobius.academy/math/units/time\\_elapsed\\_negative\\_intro/](http://app.mobius.academy/math/units/time_elapsed_negative_intro/)

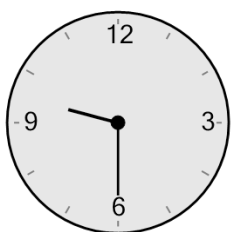
**1** What will the time be after the given change?



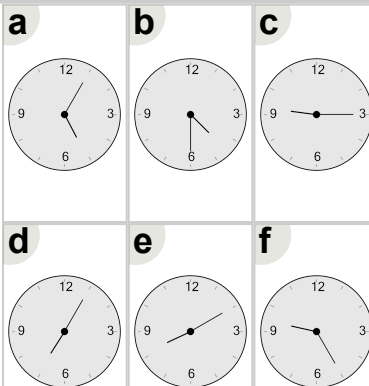
Subtract 45 min



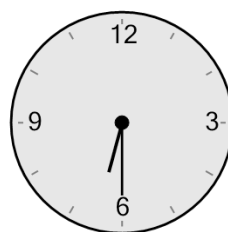
**2** What will the time be after the given change?



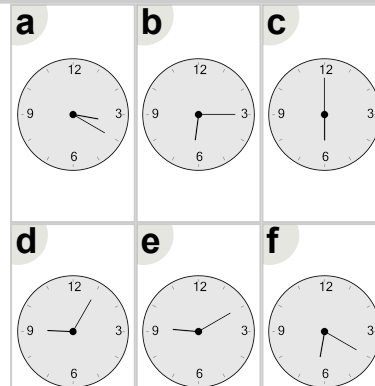
Subtract 15 min



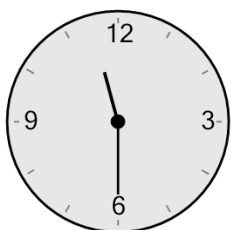
**3** What will the time be after the given change?



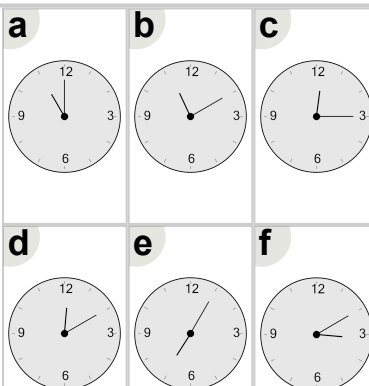
Subtract 30 min



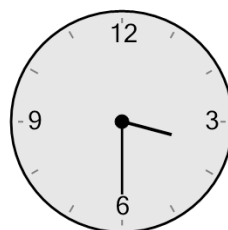
**4** What will the time be after the given change?



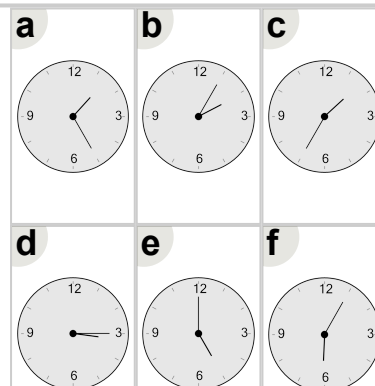
Subtract 30 min



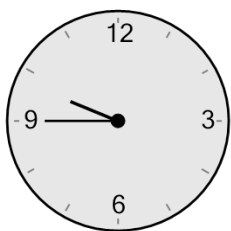
**5** What will the time be after the given change?



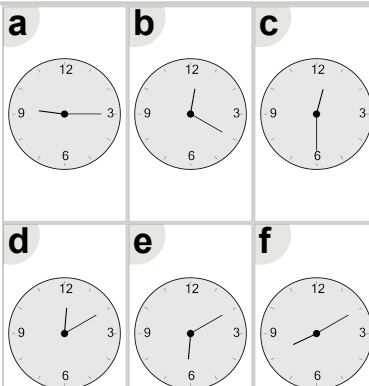
Subtract 15 min



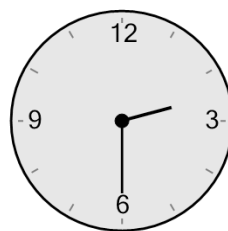
**6** What will the time be after the given change?



Subtract 30 min



**7** What will the time be after the given change?



Subtract 30 min

