



Math worksheet on 'Time - Elapsed - Time and Hours & Minutes to Clock - Five Minutes (Level 1)'.
Part of a broader unit on 'Time - Elapsed Time - Advanced'

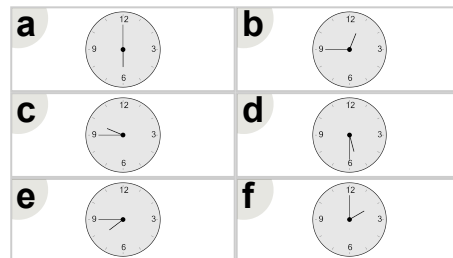
Learn online: app.mobius.academy/math/units/time_elapsed_advanced/

1

What will the time be after the given change?

9:00

Add 45 mins

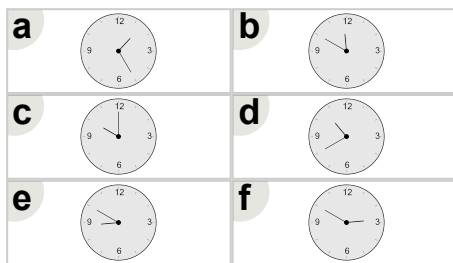


2

What will the time be after the given change?

11:20

Add 30 mins

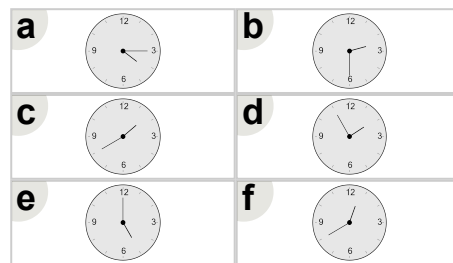


3

What will the time be after the given change?

1:25

Add 30 mins

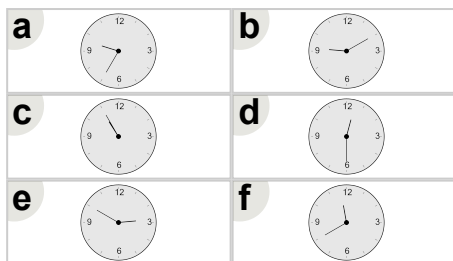


4

What will the time be after the given change?

10:10

Add 45 mins

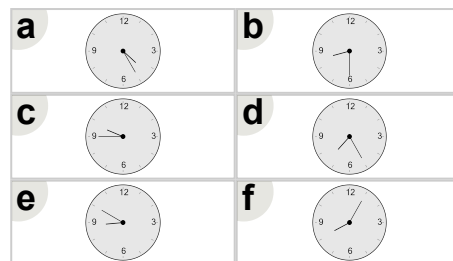


5

What will the time be after the given change?

8:20

Add 10 mins

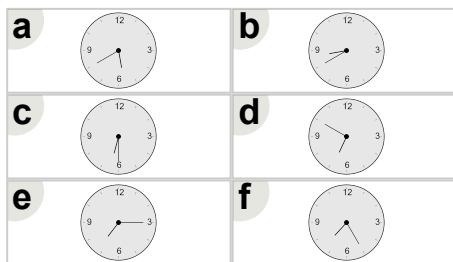


6

What will the time be after the given change?

5:25

Add 15 mins



7

What will the time be after the given change?

6:30

Add 15 mins

