



Math worksheet on 'Time - Elapsed - Time and Hours & Minutes to Clock - Five Minutes (Level 2)'.
Part of a broader unit on 'Time - Elapsed Time - Advanced'

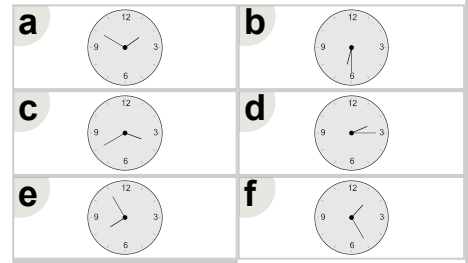
Learn online: app.mobius.academy/math/units/time_elapsed_advanced/

1

What will the time be after the given change?

3:05

Add 35 mins

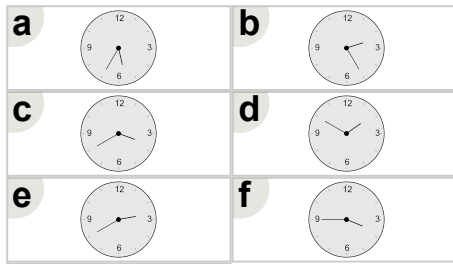


2

What will the time be after the given change?

1:25

Add 1 hr 15 mins

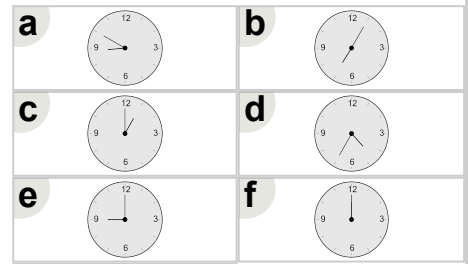


3

What will the time be after the given change?

7:55

Add 55 mins

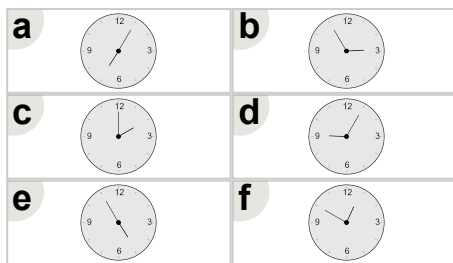


4

What will the time be after the given change?

4:20

Add 35 mins

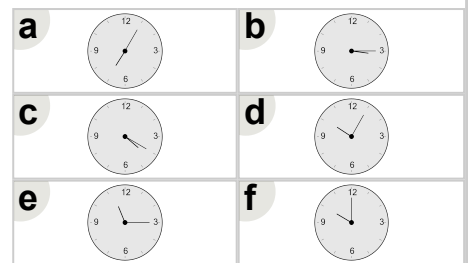


5

What will the time be after the given change?

6:30

Add 35 mins

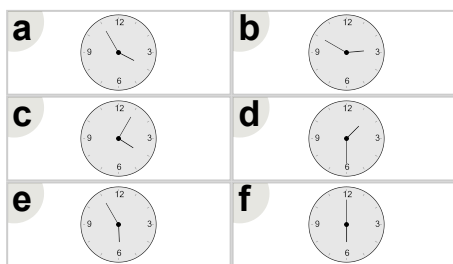


6

What will the time be after the given change?

1:35

Add 1 hr 15 mins



7

What will the time be after the given change?

1:25

Add 5 mins

