



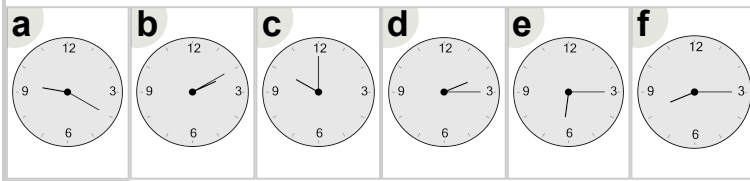
Math worksheet on 'Time - Elapsed - Time and Hours & Minutes to Clock - Full Hours (Level 1)'. Part of a broader unit on 'Time - Elapsed Time - Basics'

Learn online: [app.mobius.academy/math/units/time\\_elapsed\\_basics/](http://app.mobius.academy/math/units/time_elapsed_basics/)

**1** What will the time be after the given change?

9:00

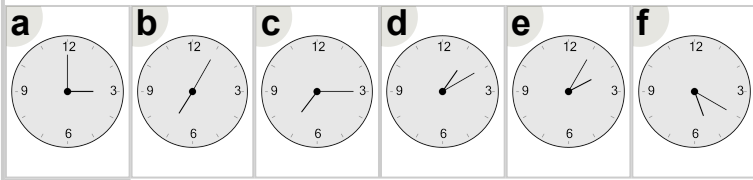
Add 1 hr



**2** What will the time be after the given change?

2:00

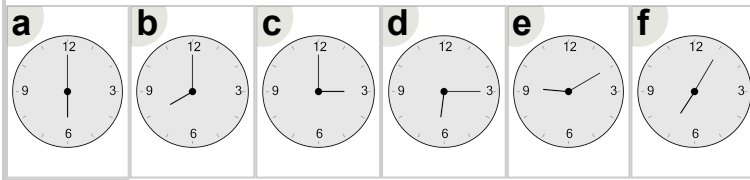
Add 1 hr



**3** What will the time be after the given change?

5:00

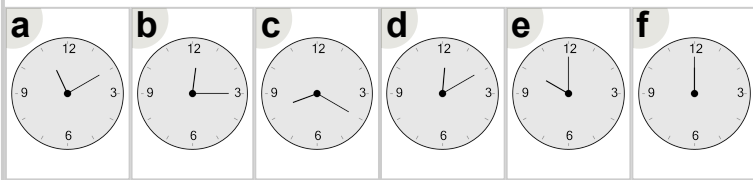
Add 1 hr



**4** What will the time be after the given change?

11:00

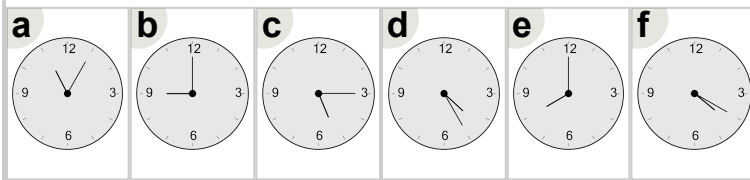
Add 1 hr



**5** What will the time be after the given change?

8:00

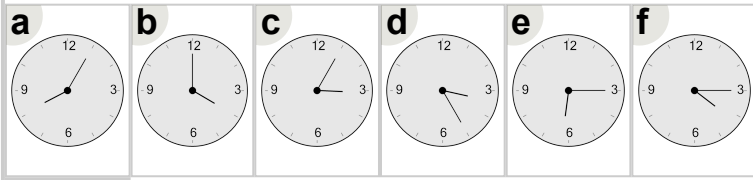
Add 1 hr



**6** What will the time be after the given change?

3:00

Add 1 hr



**7** What will the time be after the given change?

4:00

Add 1 hr

