



Math worksheet on 'Time - Elapsed - Time and Hours & Minutes to Clock - Full Hours (Level 2)'.
Part of a broader unit on 'Time - Elapsed Time - Practice'

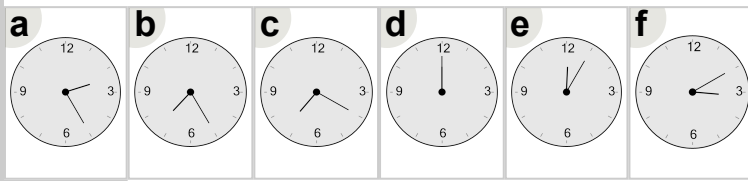
Learn online: app.mobius.academy/math/units/time_elapsed_practice/

1

What will the time be after the given change?

10:00

Add 2 hrs

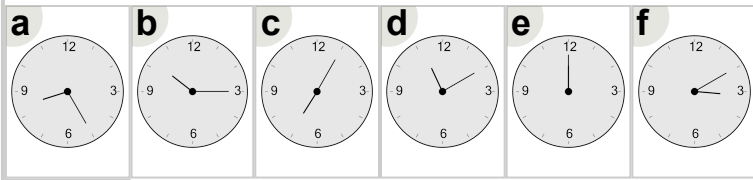


2

What will the time be after the given change?

9:00

Add 3 hrs

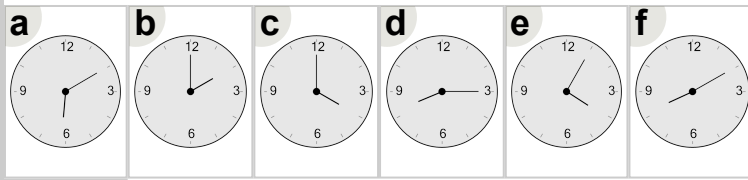


3

What will the time be after the given change?

1:00

Add 3 hrs

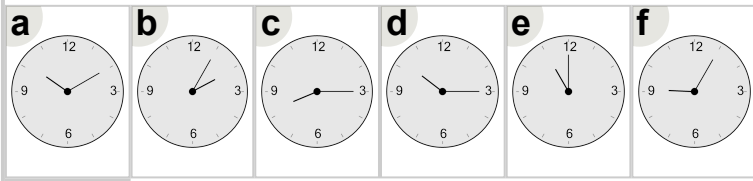


4

What will the time be after the given change?

10:00

Add 1 hr

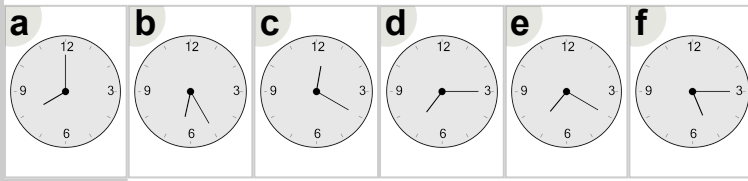


5

What will the time be after the given change?

7:00

Add 1 hr

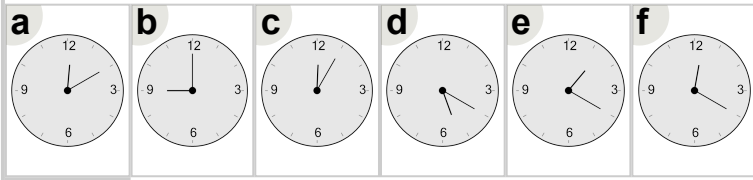


6

What will the time be after the given change?

7:00

Add 2 hrs



7

What will the time be after the given change?

4:00

Add 3 hrs

