



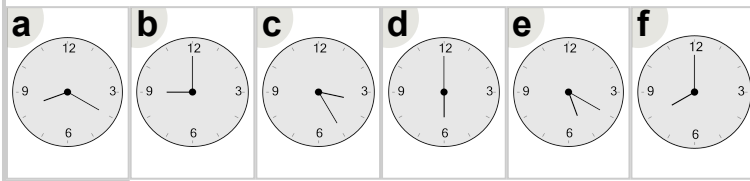
Math worksheet on 'Time - Elapsed - Time and Hours & Minutes to Clock - Full Hours (Level 3)'.
Part of a broader unit on 'Time - Elapsed Time - Intro'

Learn online: app.mobius.academy/math/units/time_elapsed_intro/

1 What will the time be after the given change?

4:00

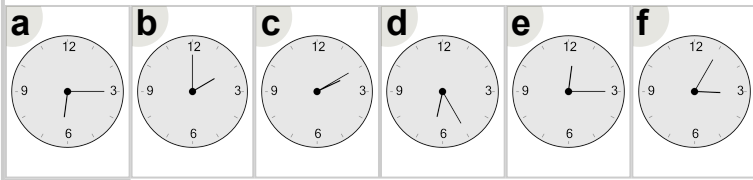
Add 2 hrs



2 What will the time be after the given change?

1:00

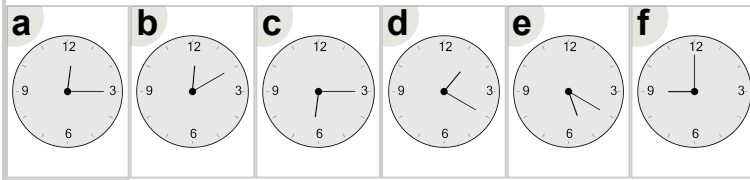
Add 1 hr



3 What will the time be after the given change?

6:00

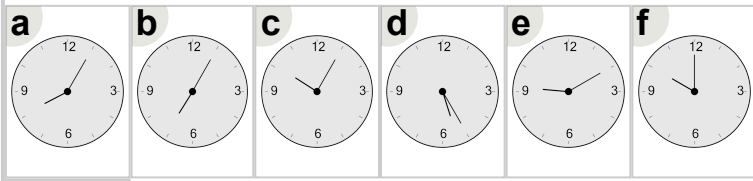
Add 3 hrs



4 What will the time be after the given change?

8:00

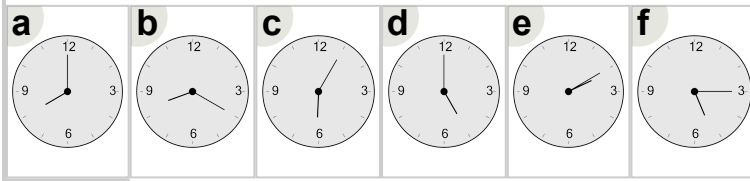
Add 2 hrs



5 What will the time be after the given change?

3:00

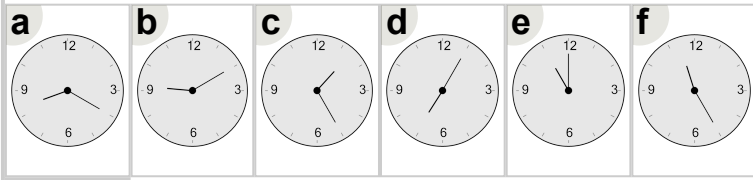
Add 2 hrs



6 What will the time be after the given change?

8:00

Add 3 hrs



7 What will the time be after the given change?

5:00

Add 2 hrs

